



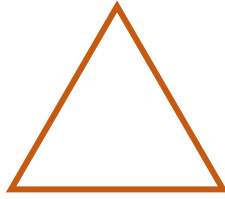
- Aşağıdaki geometrik şekillerin adını yazınız.




- Aşağıdaki geometrik şekilleri isimleri ile eşleştiriniz.




1



2



3



4

Kare

Daire

Dikdörtgen

Üçgen

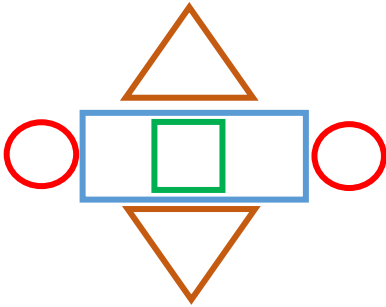
.....

.....

.....

.....

- Aşağıdaki şekilleri örnekteki gibi sayarak yazalım.

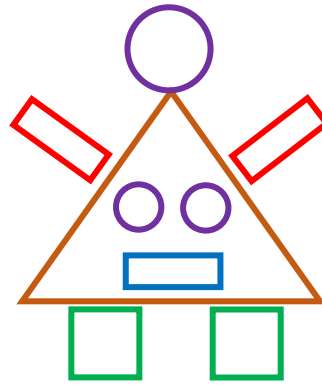


2 üçgen

1 kare

2 daire

1 dikdörtgen

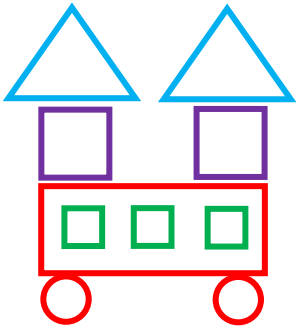


.....

.....

.....

.....

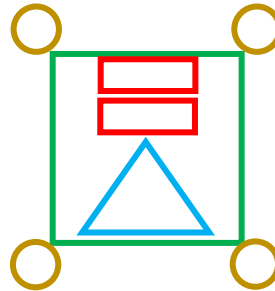


.....

.....

.....

.....



.....

.....

.....

.....