



## BİLEŞİK KESİRLER 2



- Aşağıda okunuşu verilen bileşik kesirleri örnekteki gibi kesir çizgisi kullanarak yazınız. Model ile gösteriniz.

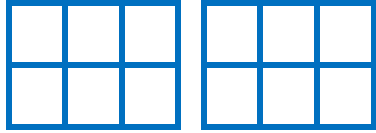
Beş bölü dört



Kesir:  $\frac{\quad}{\quad}$



Dokuz bölü altı



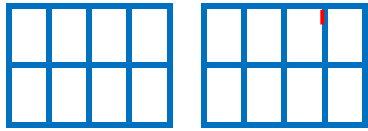
Kesir:  $\frac{\quad}{\quad}$

Yedi bölü beş




Kesir:  $\frac{\quad}{\quad}$

On bölü sekiz



Kesir:  $\frac{\quad}{\quad}$

Sekiz bölü üç



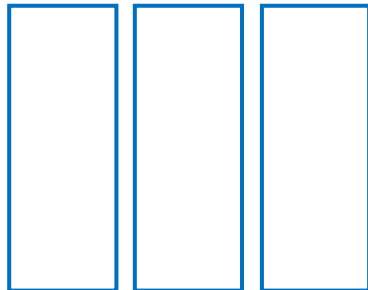
Kesir:  $\frac{\quad}{\quad}$

Altı bölü dört



Kesir:  $\frac{\quad}{\quad}$

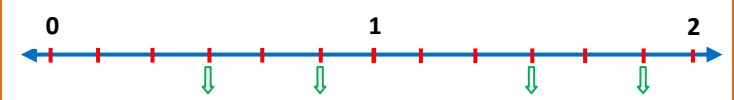
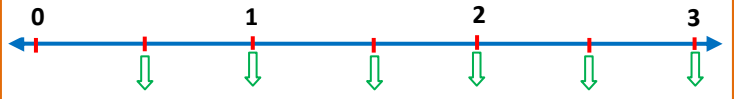
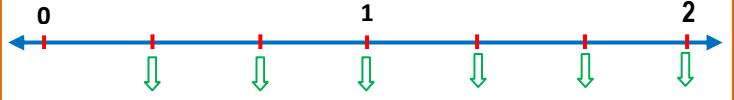
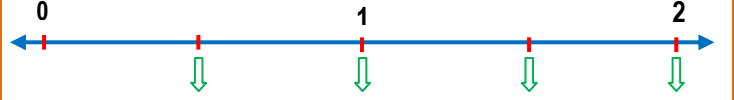
On iki bölü beş



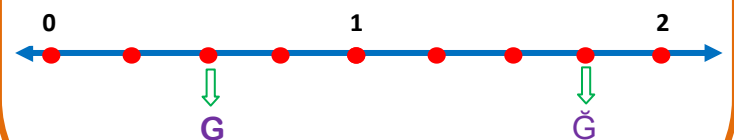
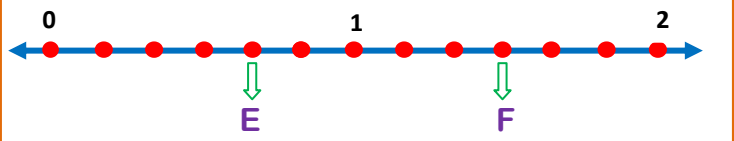
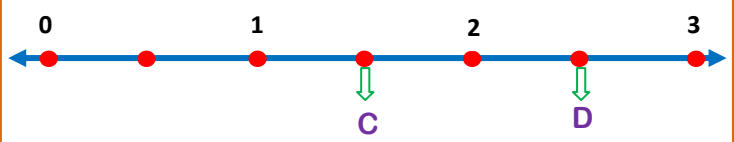
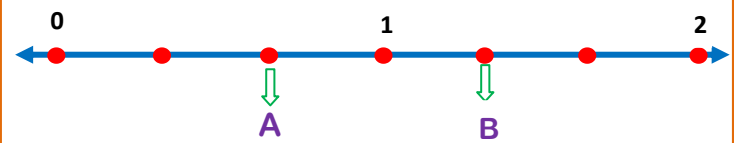
Kesir:  $\frac{\quad}{\quad}$

İskender07

- Sayı doğrusu üzerinde oklarla gösterilen noktalara denk gelen bileşik kesirleri yazınız.



- Aşağıdaki sayı doğrusu üzerindeki harflere denk gelen kesir sayılarını altlarına yazınız.



İskender07