



GEOMETRİK ŞEKİLLER




3 kenarım,
3 köşem var.



Kenarım ve
köşem yoktur.


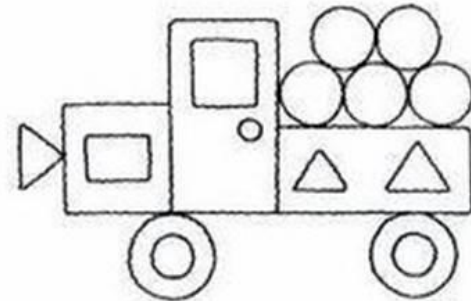
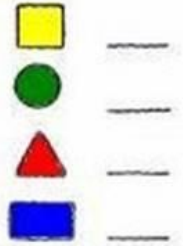





4 kenarım,
4 köşem var.
Bütün kenarlarım
birbirine eşittir.


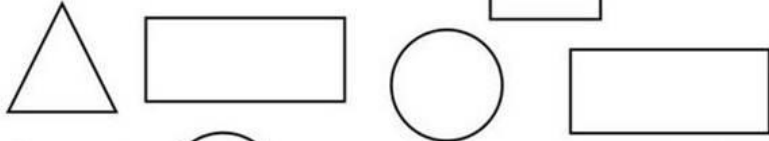
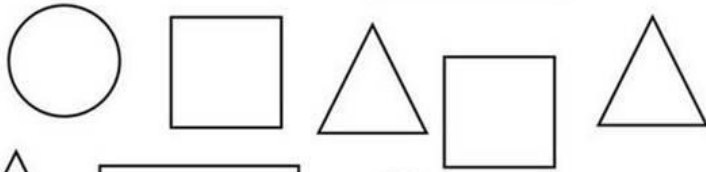



4 kenarım,
4 köşem var.
Karşılıklı kenarlarım
birbirine eşittir.

Renkerine ve şekillerine
uygun boyayalım.



GEOMETRİK ŞEKİLLER



ŞEKİLLERİ EŞLEŞTİRELİM

