




TAM SAYILI KESİRLER 2



- Aşağıda verilen bileşik kesirleri örnekteki gibi kesir çizgisi kullanarak yazınız. Model ile gösteriniz.

İki tam üç bölü bir



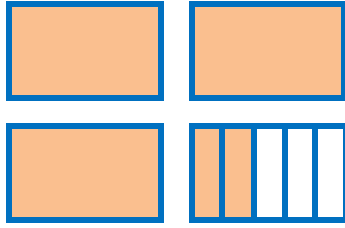
Kesir: $2 \frac{1}{3}$

Okunuşu:



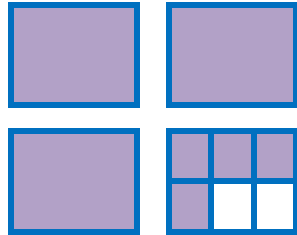
Kesir:

Okunuşu:



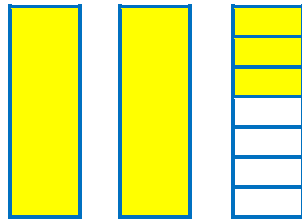
Kesir:

Okunuşu:



Kesir:

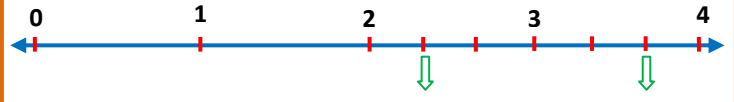
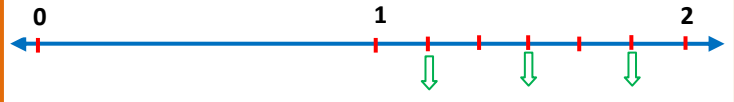
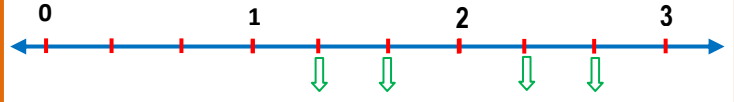
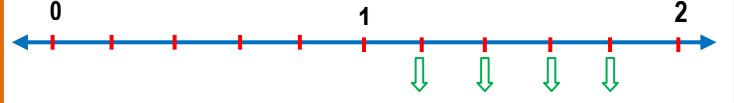
Okunuşu:



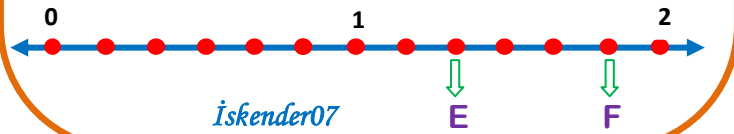
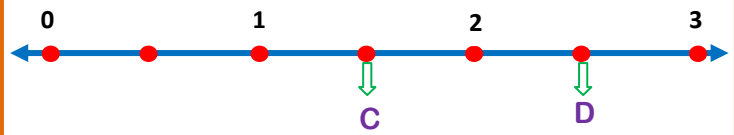
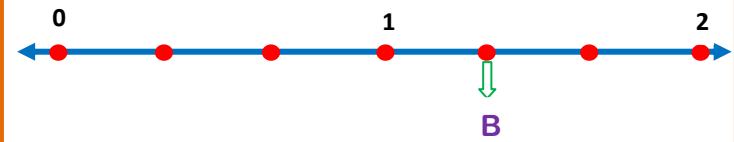
Kesir:

İskender07

- Sayı doğrusu üzerinde oklarla gösterilen noktalara denk gelen bileşik kesirleri yazınız.



- Aşağıdaki sayı doğrusu üzerindeki harflere denk gelen kesir sayılarını altlarına yazınız.



İskender07

- Aşağıdaki sayı doğrusu üzerindeki oklarla gösterilrn kesir sayılarını altlarına yazınız.

