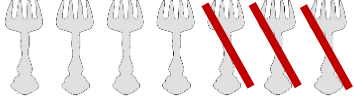





## ÇIKARMA İŞLEMİ ÇALIŞMASI 2



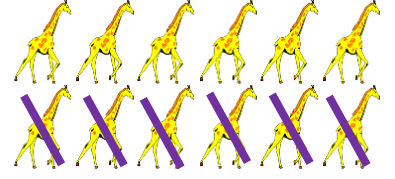
- Aşağıda verilen çıkarma işlemi inceleyiniz. Verilen örneğe uygun olacak şekilde soruları cevaplayınız.



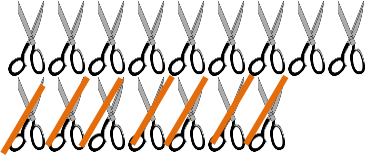
$$\begin{array}{r} \dots 7 \dots \\ - \dots 3 \dots \\ \hline \dots 4 \dots \end{array}$$



$$\begin{array}{r} \dots \dots \dots \\ - \dots \dots \dots \\ \hline \dots \dots \dots \end{array}$$




$$\begin{array}{r} \dots \dots \dots \\ - \dots \dots \dots \\ \hline \dots \dots \dots \end{array}$$



$$\begin{array}{r} \dots \dots \dots \\ - \dots \dots \dots \\ \hline \dots \dots \dots \end{array}$$



$$\begin{array}{r} \dots \dots \dots \\ - \dots \dots \dots \\ \hline \dots \dots \dots \end{array}$$



$$\begin{array}{r} \dots \dots \dots \\ - \dots \dots \dots \\ \hline \dots \dots \dots \end{array}$$




$$\begin{array}{r} \dots \dots \dots \\ - \dots \dots \dots \\ \hline \dots \dots \dots \end{array}$$




$$\begin{array}{r} \dots \dots \dots \\ - \dots \dots \dots \\ \hline \dots \dots \dots \end{array}$$



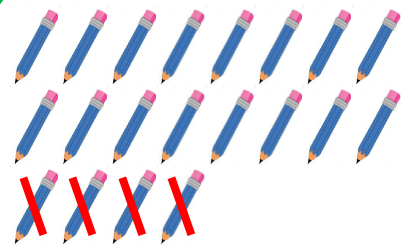
$$\begin{array}{r} \dots \dots \dots \\ - \dots \dots \dots \\ \hline \dots \dots \dots \end{array}$$



$$\begin{array}{r} \dots \dots \dots \\ - \dots \dots \dots \\ \hline \dots \dots \dots \end{array}$$



$$\begin{array}{r} \dots \dots \dots \\ - \dots \dots \dots \\ \hline \dots \dots \dots \end{array}$$



$$\begin{array}{r} \dots \dots \dots \\ - \dots \dots \dots \\ \hline \dots \dots \dots \end{array}$$