



# Doğal Sayılar



Baykuşlar kaç onluk kaç birlikten oluşmuştur?



Birlik



Onluk

Küçükten büyüğe doğru sıralayalım.

65-87-36-45-12-20-9


8 onluk 3 birlik şeklinde çözümlenen sayı hangisidir?

38


83

88


Kabakları büyükten küçüğe doğru sıralayınız?




Onluk ve birlikleri eşleyiniz?



Noktaları ifade eden sayıları örnekteki gibi yazalım?



Uygun olan resmi çiziniz?




BÜYÜKTÜR



KÜÇÜKTÜR

75-68 den.....



36-12 den.....

25-36 dan.....

67-56 den.....

23-19 dan.....

37-39 dan.....

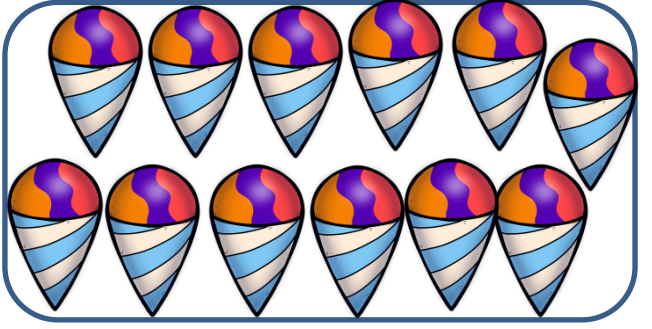

87-68 den.....

72-84 den.....

41-21 den.....


@elif\_ogretmeenn

Onluk ve birlikleri yazınız?



ONLUK	BİRLİK
SAYI	

ONLUK	BİRLİK
SAYI	



ONLUK	BİRLİK
SAYI	

ONLUK	BİRLİK
SAYI	

Küçükten büyüğe doğru sıralayınız?

56-97-13-64-10-30-3

@elif\_ogretmeenn