


Ritmik sayma yaparak, ařağıdaki
arpma iřlemlerinin cevaplarını bulun.



$3 \times 2 =$

$3 \times 2 =$

$5 \times 2 =$

$8 \times 2 =$

$2 \times 2 =$

$5 \times 2 =$

$7 \times 2 =$

$2 \times 2 =$

$8 \times 2 =$

$0 \times 2 =$

$5 \times 2 =$

$9 \times 2 =$

$9 \times 2 =$

$1 \times 2 =$

$10 \times 2 =$

$4 \times 2 =$

$6 \times 2 =$

$10 \times 2 =$

$4 \times 2 =$

$0 \times 2 =$

Ritmik sayma yaparak, ařağıdaki
arpma iřlemlerinin cevaplarını bulun



$3 \times 3 =$

$5 \times 3 =$

$2 \times 3 =$

$7 \times 3 =$

$8 \times 3 =$

$5 \times 3 =$

$9 \times 3 =$

$10 \times 3 =$

$6 \times 3 =$

$4 \times 3 =$

$3 \times 3 =$

$8 \times 3 =$

$5 \times 3 =$

$2 \times 3 =$

$0 \times 3 =$

$9 \times 3 =$

$1 \times 3 =$

$4 \times 3 =$

$10 \times 3 =$

$0 \times 3 =$

Ritmik sayma yaparak, ařağıdaki
arpma iřlemlerinin cevaplarını bulun

4

$3 \times 4 =$

$5 \times 4 =$

$2 \times 4 =$

$7 \times 4 =$

$8 \times 4 =$

$5 \times 4 =$

$9 \times 4 =$

$10 \times 4 =$

$6 \times 4 =$

$4 \times 4 =$

$3 \times 4 =$

$8 \times 4 =$

$5 \times 4 =$

$2 \times 4 =$

$0 \times 4 =$

$9 \times 4 =$

$1 \times 4 =$

$4 \times 4 =$

$10 \times 4 =$

$0 \times 4 =$

Ritmik sayma yaparak, ařađıdaki
arpma iřlemlerinin cevaplarını bulun

5

$3 \times 5 =$

$5 \times 5 =$

$2 \times 5 =$

$7 \times 5 =$

$8 \times 5 =$

$5 \times 5 =$

$9 \times 5 =$

$10 \times 5 =$

$6 \times 5 =$

$4 \times 5 =$

$3 \times 5 =$

$8 \times 5 =$

$5 \times 5 =$

$2 \times 5 =$

$0 \times 5 =$

$9 \times 5 =$

$1 \times 5 =$

$4 \times 5 =$

$10 \times 5 =$

$0 \times 5 =$

Ritmik sayma yaparak, ařađıdaki
arpma iřlemlerinin cevaplarını bulun



$3 \times 6 =$

$3 \times 6 =$

$5 \times 6 =$

$8 \times 6 =$

$2 \times 6 =$

$5 \times 6 =$

$7 \times 6 =$

$2 \times 6 =$

$8 \times 6 =$

$0 \times 6 =$

$5 \times 6 =$

$9 \times 6 =$

$9 \times 6 =$

$1 \times 6 =$

$10 \times 6 =$

$4 \times 6 =$

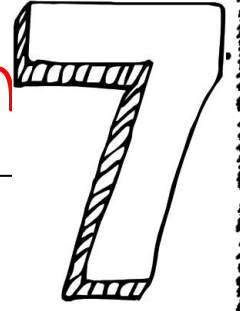
$6 \times 6 =$

$10 \times 6 =$

$4 \times 6 =$

$0 \times 6 =$

Ritmik sayma yaparak, ařağıdaki
arpma iřlemlerinin cevaplarını bulun



$3 \times 7 =$

$3 \times 7 =$

$5 \times 7 =$

$8 \times 7 =$

$2 \times 7 =$

$5 \times 7 =$

$7 \times 7 =$

$2 \times 7 =$

$8 \times 7 =$

$0 \times 7 =$

$5 \times 7 =$

$9 \times 7 =$

$9 \times 7 =$

$1 \times 7 =$

$10 \times 7 =$

$4 \times 7 =$


$6 \times 7 =$

$10 \times 7 =$

$4 \times 7 =$

$0 \times 7 =$

Ritmik sayma yaparak, ařağıdaki
arpma iřlemlerinin cevaplarını bulun



$$3 \times 8 =$$

$$5 \times 8 =$$

$$2 \times 8 =$$

$$7 \times 8 =$$

$$8 \times 8 =$$

$$5 \times 8 =$$

$$9 \times 8 =$$

$$10 \times 8 =$$

$$6 \times 8 =$$

$$4 \times 8 =$$

$$3 \times 8 =$$

$$8 \times 8 =$$

$$5 \times 8 =$$

$$2 \times 8 =$$

$$0 \times 8 =$$

$$9 \times 8 =$$


$$1 \times 8 =$$

$$4 \times 8 =$$

$$10 \times 8 =$$

$$0 \times 8 =$$

Ritmik sayma yaparak, ařağıdaki
arpma iřlemlerinin cevaplarını bulun.



$3 \times 9 =$

$5 \times 9 =$

$2 \times 9 =$

$7 \times 9 =$

$8 \times 9 =$

$5 \times 9 =$

$9 \times 9 =$

$10 \times 9 =$

$6 \times 9 =$

$4 \times 9 =$

$3 \times 9 =$

$8 \times 9 =$

$5 \times 9 =$

$2 \times 9 =$

$0 \times 9 =$

$9 \times 9 =$

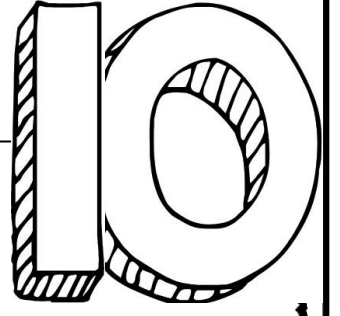
$1 \times 9 =$

$4 \times 9 =$

$10 \times 9 =$

$0 \times 9 =$

Ritmik sayma yaparak, ařağıdaki arpma iřlemlerinin cevaplarını bulun.



$$3 \times 10 =$$

$$3 \times 10 =$$

$$5 \times 10 =$$

$$8 \times 10 =$$

$$2 \times 10 =$$

$$5 \times 10 =$$

$$7 \times 10 =$$

$$2 \times 10 =$$

$$8 \times 10 =$$

$$0 \times 10 =$$

$$5 \times 10 =$$

$$9 \times 10 =$$

$$9 \times 10 =$$

$$1 \times 10 =$$

$$10 \times 10 =$$

$$4 \times 10 =$$

$$6 \times 10 =$$

$$10 \times 10 =$$

$$4 \times 10 =$$

$$0 \times 10 =$$