

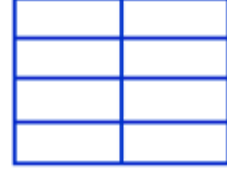
1) Şekillerin çeyreğini boyayarak, boyalı kısma karşılık gelen kesri yazalım.



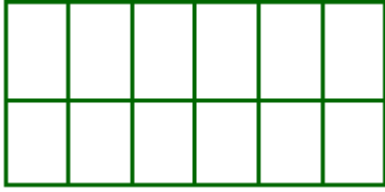
.....
——
.....



.....
——
.....



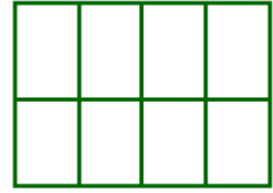
.....
——
.....



.....
——
.....



.....
——
.....



.....
——
.....

2) Aşağıdaki şekillerin çeyreğini boyayalım.

