


Erikli Toplama İşlemleri

Haydi şimdi toplama yapalım. Toplama yaparken erikleri de sayalım.


$$\begin{array}{r} 4 \\ + 5 \\ \hline \end{array}$$




$$\begin{array}{r} 6 \\ + 2 \\ \hline \end{array}$$




$$\begin{array}{r} 7 \\ + 2 \\ \hline \end{array}$$




$$\begin{array}{r} 8 \\ + 5 \\ \hline \end{array}$$



$$\begin{array}{r} 5 \\ + 6 \\ \hline \end{array}$$



$$\begin{array}{r} 9 \\ + 3 \\ \hline \end{array}$$



$$\begin{array}{r} 4 \\ + 3 \\ \hline \end{array}$$

