


# GEOMETRİK ŞEKİLLER


1.Etkinlik : Aşağıdaki geometrik şekillerin adlarını , kenar ve köşe sayılarını yazalım.



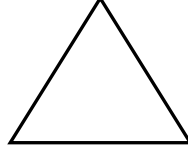
Kenar sayısı: .....  
Köşe sayısı: .....



Kenar sayısı: .....  
Köşe sayısı: .....



Kenar sayısı: .....  
Köşe sayısı: .....



Kenar sayısı: .....  
Köşe sayısı: .....

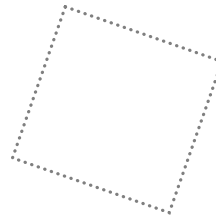
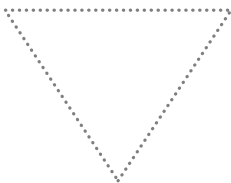
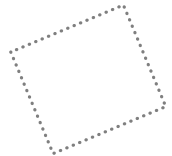
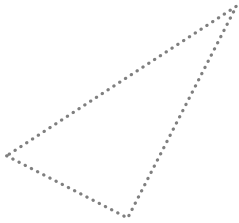

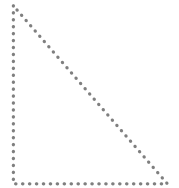


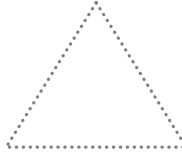
2.Etkinlik : Aşağıdaki geometrik şekilleri belirtilen renklerle çizelim.Şekillerin her birinden kaç tane olduğunu yazalım.

Üçgen → kırmızı

Çember → mavi

Dikdörtgen → kahverengi

Kare → yeşil



Üçgen → .....

Çember → .....

Dikdörtgen → .....

Kare → .....