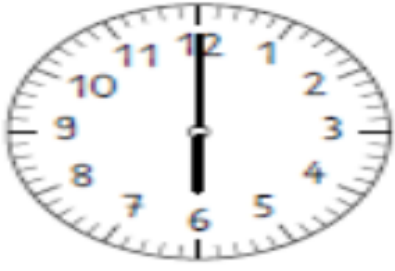
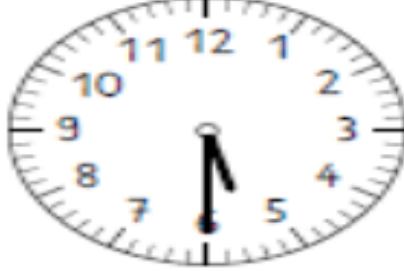


# TAM VE YARIM SAATLERİ ÖĞRENIYORUM

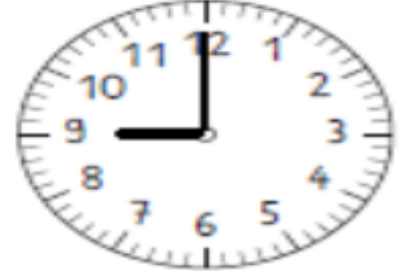
Aşağıdaki tam ve yarım saatlerin kaç gösterdiğini bulup boyayınız.



06:00 | 12:00 | 06:12



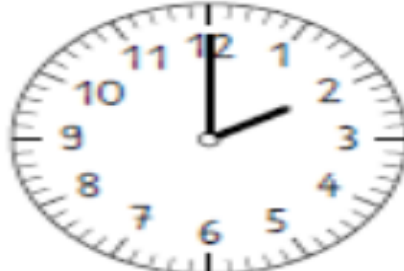
05:00 | 06:00 | 05:30



12:00 | 09:00 | 09:12



11:30 | 12:30 | 11:06



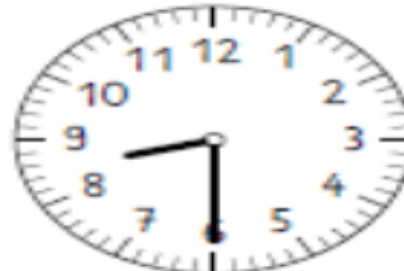
02:00 | 12:00 | 02:12




12:06 | 01:30 | 12:30



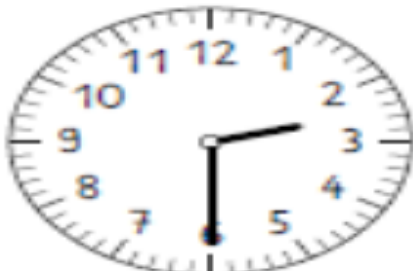
04:00 | 12:00 | 04:12




06:08 | 09:30 | 08:30



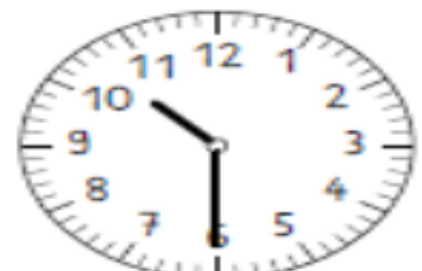
11:12 | 11:00 | 12:00



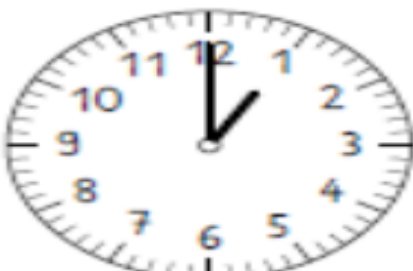
02:30 | 02:06 | 03:30



12:00 | 07:00 | 07:12



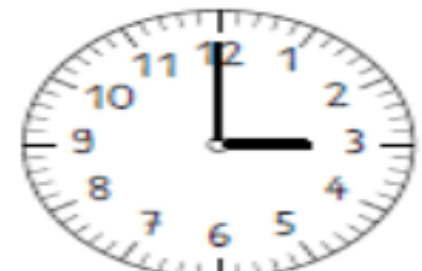
11:30 | 10:06 | 10:30



01:00 | 12:00 | 01:12



07:06 | 06:30 | 07:30



03:12 | 12:00 | 03:00