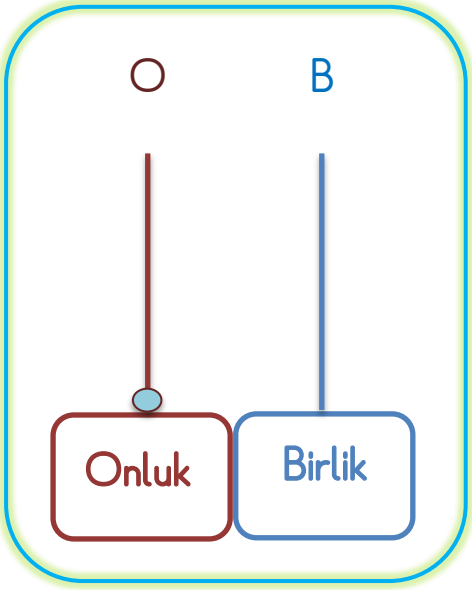
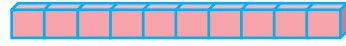


“ 1 0 ” rakamını yazalım.



1 0



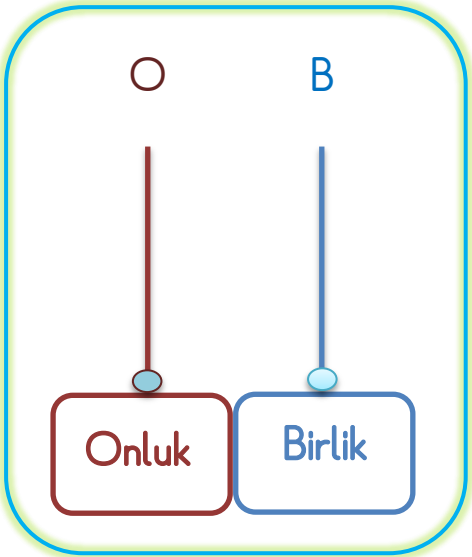
→ 1 Onluk

→ 0 Birlik

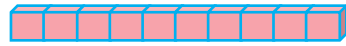
10 10 10 10 10 10

10 10

❖ “ 1 1 ” rakamını yazalım.



1 1



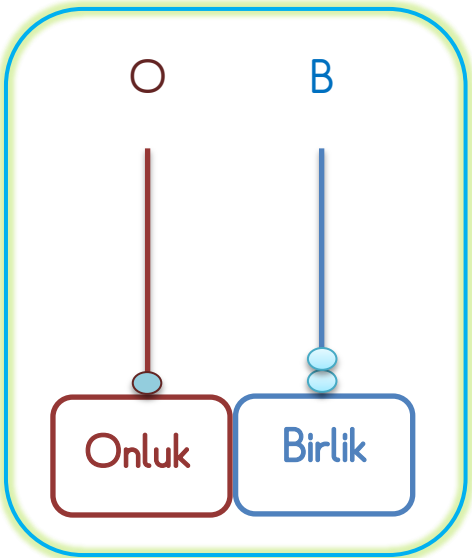
→ 1 Onluk

→ 1 Birlik

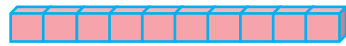
11 11 11 11 11 11 11

11 11

❖ “ 1 2 ” rakamını yazalım.



1 2



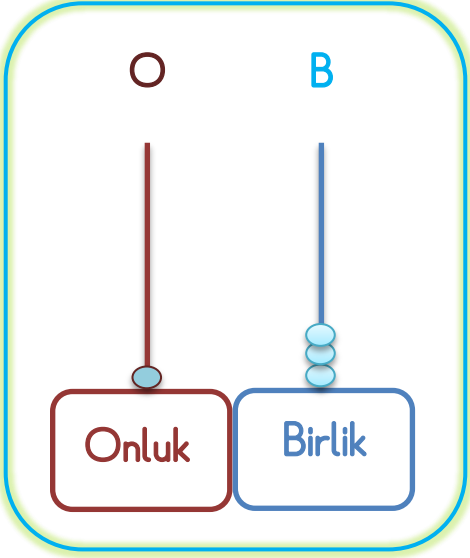
→ 1 Onluk

→ 2 Birlik

12 12 12 12 12 12

12 12

❖ " 1 3 " rakamını yazalım.



1 3



1 Onluk

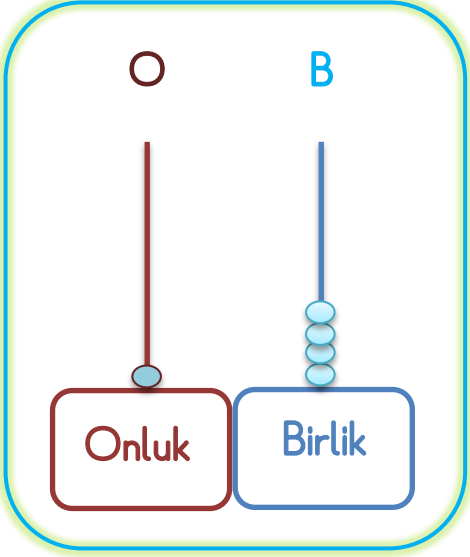


3 Birlik

13 13 13 13 13 13

13 13

❖ " 1 4 " rakamını yazalım.



1 4



1 Onluk

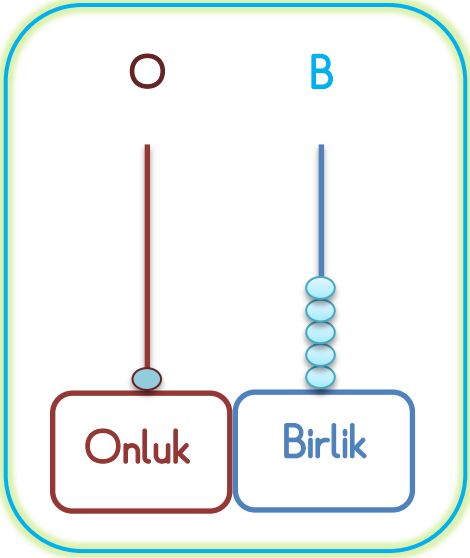


4 Birlik

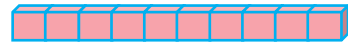
14 14 14 14 14 14

14 14

❖ " 1 5 " rakamını yazalım.



1 5



1 Onluk

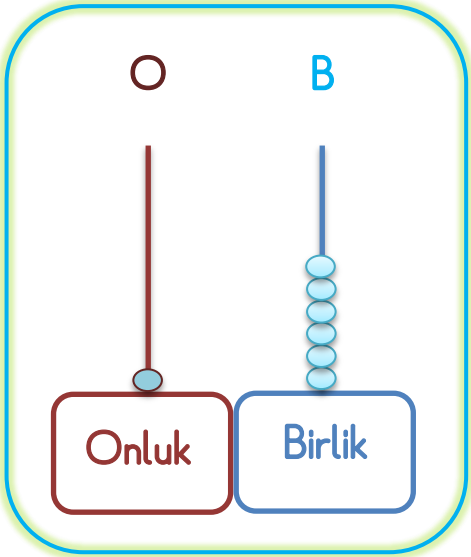


5 Birlik

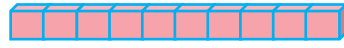
15 15 15 15 15 15

15 15

❖ " 16 " rakamını yazalım.



16



→ 1 Onluk

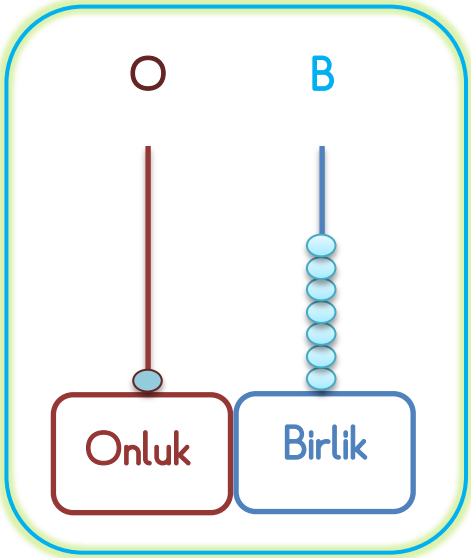


→ 6 Birlik

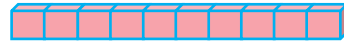
16 16 16 16 16 16

16 16

❖ " 17 " rakamını yazalım.



17



→ 1 Onluk

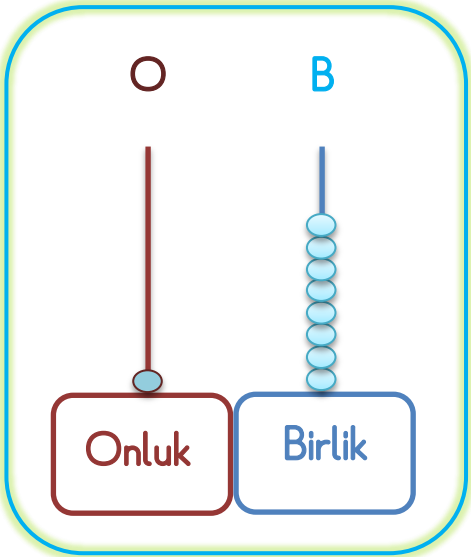


→ 7 Birlik

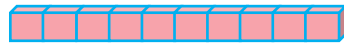
17 17 17 17 17 17

17 17

❖ " 18 " rakamını yazalım.



18



→ 1 Onluk

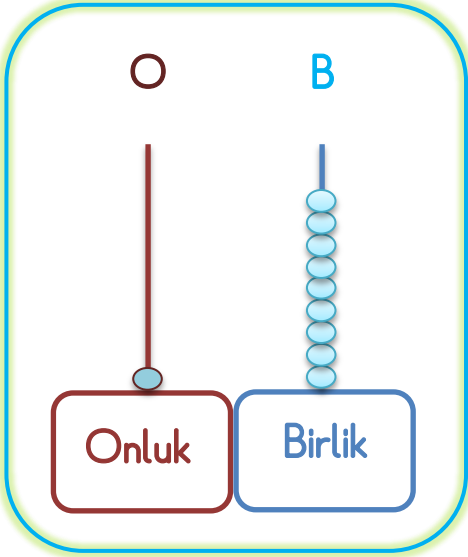


→ 8 Birlik

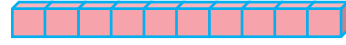
18 18 18 18 18 18

18 18

❖ " 19 " rakamını yazalım.



19



1 Onluk

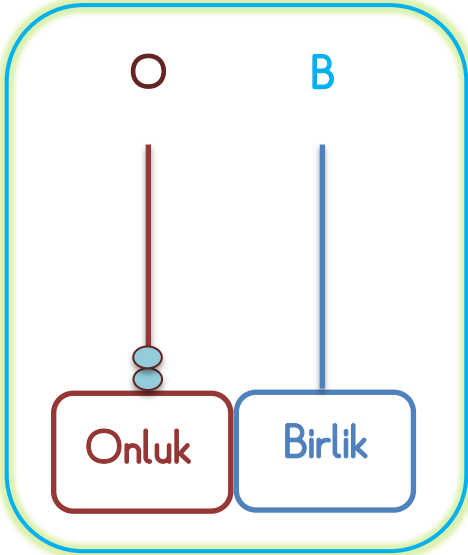


9 Birlik

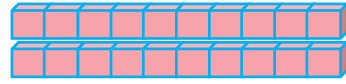
19 19 19 19 19 19

19 19

❖ " 20 " rakamını yazalım.



20



2 Onluk


0 Birlik

20 20 20 20 20

20 20

KENDİMİ DEĞERLENDİRİYORUM


1. Varlıkları sayalım. Doğru rakamın bulunduğu kutucuğu işaretleyelim.



15



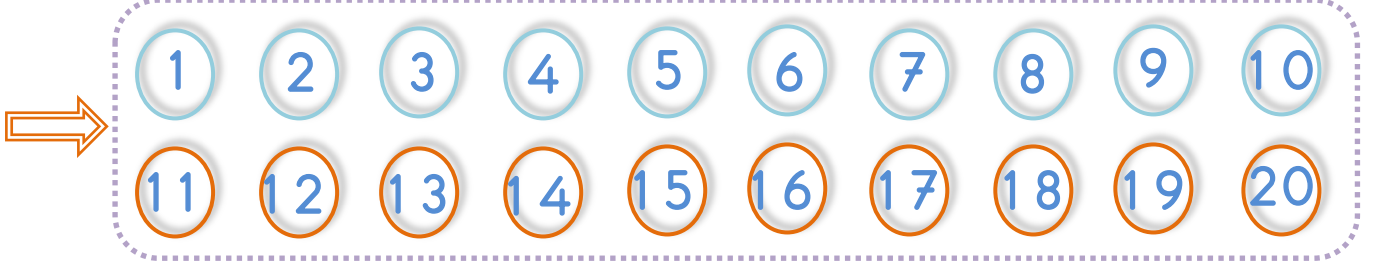
12



16

❖ 20'ye Kadar Doğal Sayılar: Önce, Sonra, Arasında

1. 1'den başlayıp 20'ye kadar yazalım.



2. Verilen sayılara göre önceki, sonraki ve aradaki sayıları yazalım.

Öncesi

11	←	12
○	←	11
○	←	15
○	←	18
○	←	13
○	←	19

Arasında

7	8	9
12	○	14
18	○	20
9	○	11
5	○	7
15	○	17

Sonrası

12	→	13
15	→	○
18	→	○
13	→	○
19	→	○
11	→	○


3. Tablolarda boş kutulara uygun sayıları yazalım.

1		3		5
	7		9	
11			14	
		18		20

1			4	
	7			
		13		
16				


1							8		10
			13						

4. Aşağıdaki topları birer birer sayalım.




..... tane top vardır.

5. Aşağıdaki mantarları birer birer sayalım.



..... tane mantar vardır.

6. Aşağıdaki varlıkları birer birer sayalım. **Bir fazlasını** altına yazalım.



Sayfalarımızı bütün **öğretmen** ve **velileriniz** takip edebilir.

Sitemize **ücretsiz** olup, **her hafta** düzenli olarak döküman yüklenmektedir.
Bütün testlerimiz online test şeklindedir.

Her ay **Türkiye geneli ödüllü online deneme sınavı** yapılmaktadır.

İnternet sitemiz

<https://ilkokulsoru.com/>

Facebook

<https://www.facebook.com/groups/ilkokulsorucom/>

Instagram

<https://www.instagram.com/p/CHOSYc8Ddbg/?igshid=aepfymlq9rx7>

Telegram

t.me/ilkokulsorucom