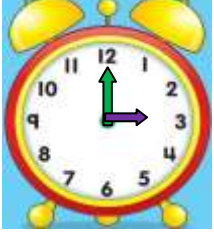


# TAM YARIM VE ÇEYREK SAATLERİN ÖĞLEDEN ÖNCE VE SONRA OKUNUŞU

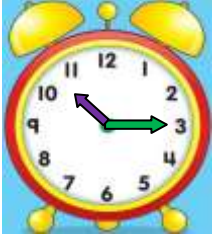
- Aşağıda verilen saatlerin öğleden önce kaçı gösterdiklerini okunuşlarını yazınız.



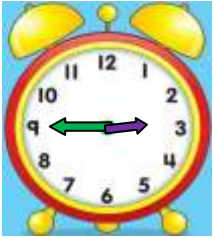
Okunuşu:



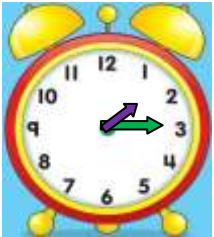
Okunuşu:



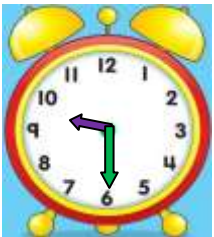
Okunuşu:



Okunuşu:



Okunuşu:



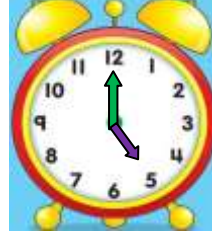
Okunuşu:



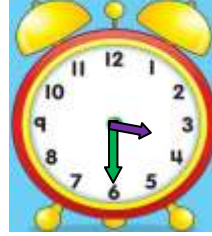
Okunuşu:

İskender07

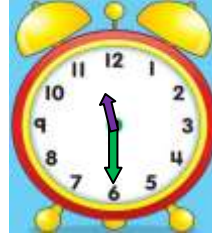
- Aşağıda verilen saatlerin öğleden sonra kaçı gösterdiklerini okunuşlarını yazınız.




Okunuşu:



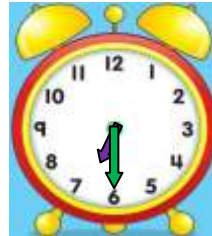
Okunuşu:



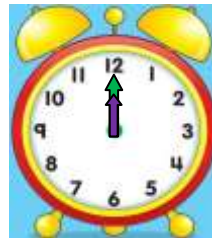
Okunuşu:



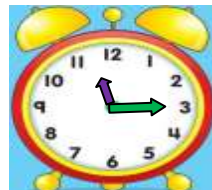
Okunuşu:



Okunuşu:



Okunuşu:



Okunuşu:

İskender07