
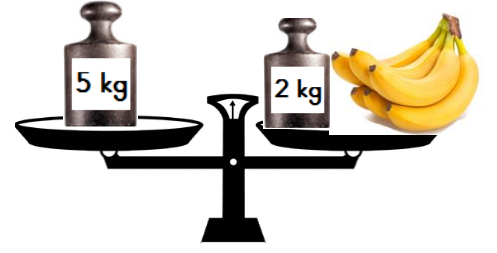


TARTMA

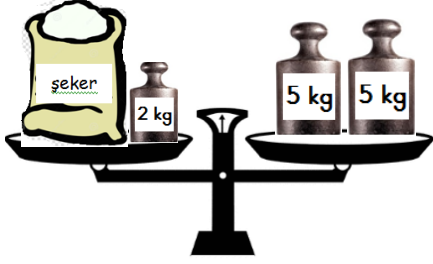
1. Etkinlik: Aşağıda verilen ağırlık (kütle) ölçüm sonuçlarını yazınız.



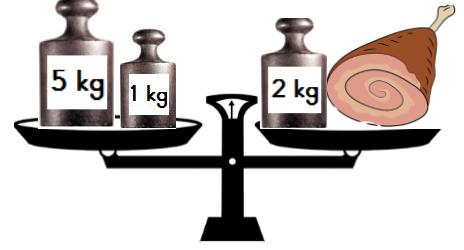
Armutun ağırlığı kilogramdır.




Muzun ağırlığı kilogramdır.



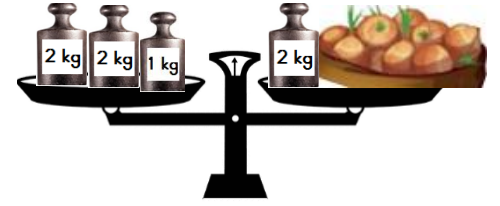
Şekerin ağırlığı kilogramdır.




Etin ağırlığı kilogramdır.




Balığın ağırlığı kilogramdır.




Soğanın ağırlığı kilogramdır.



Domatesin ağırlığı kilogramdır.



Çileğin ağırlığı kilogramdır.



Karpuzun ağırlığı kilogramdır.



Pirincin ağırlığı kilogramdır.