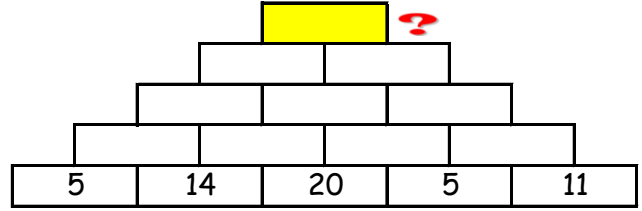
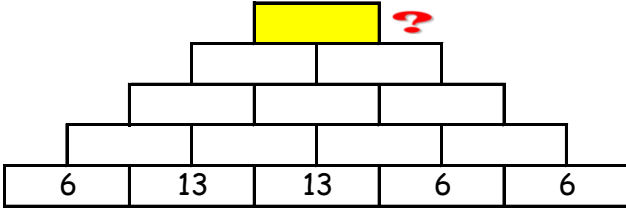
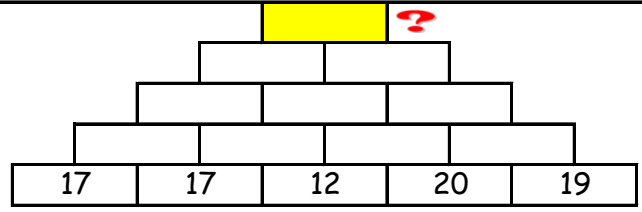
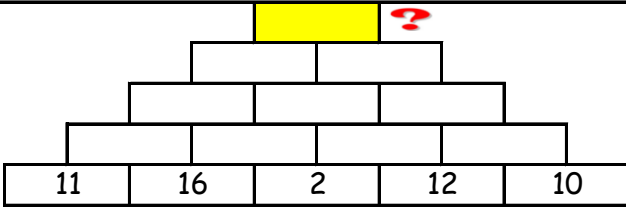


## PİRAMİT TOPLAMA

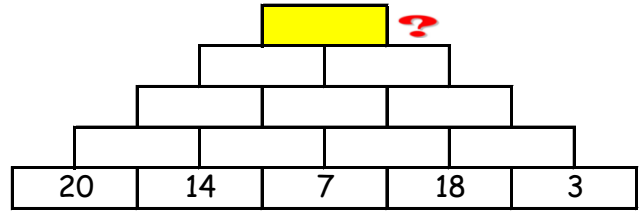
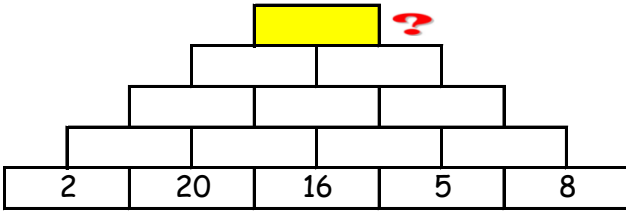
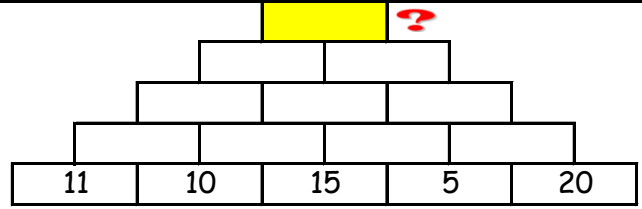
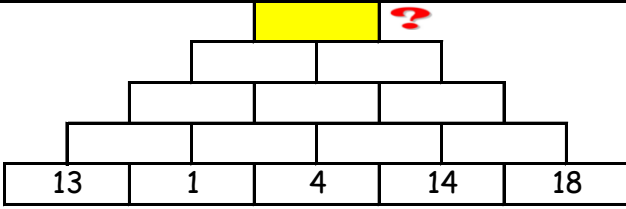
Toplama piramitlerinde aşağıdaki iki kutunun toplamını bir üst kutuya yazarak ilerle. En tepedeki sayıyı bul ve işaretle.



166 - 212 - 145 - 156 - 256

## PİRAMİT TOPLAMA

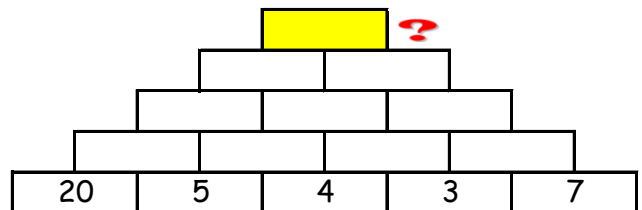
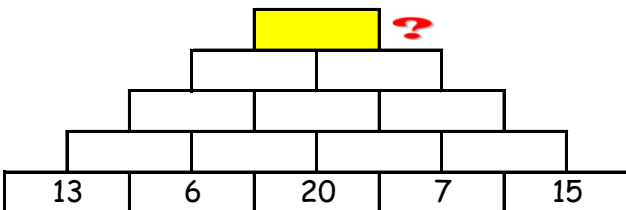
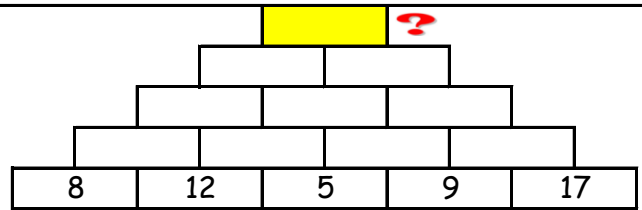
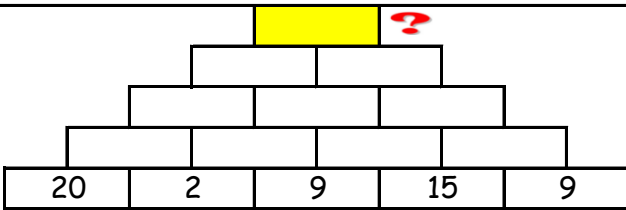
Toplama piramitlerinde aşağıdaki iki kutunun toplamını bir üst kutuya yazarak ilerle. En tepedeki sayıyı bul ve işaretle.



206 - 181 - 193 - 120 - 115

## PİRAMİT TOPLAMA

Toplama piramitlerinde aşağıdaki iki kutunun toplamını bir üst kutuya yazarak ilerle. En tepedeki sayıyı bul ve işaretle.



151 - 180 - 139 - 83 - 200