

BİLEŞİK KESRİ TAM SAYILI KESRE ÇEVİRME

🚩 Aşağıdaki alıştırmaları örnekteki gibi yaparak tam sayılı kesirlere çevirin.


$$\frac{5}{3}$$




Boyalı kısım 1 tam üçte iki

$$\begin{array}{r} 5 \\ -3 \\ \hline 2 \end{array} \begin{array}{l} 3 \text{ payda} \\ 1 \text{ tam} \\ 2 \text{ pay} \end{array} \quad 1\frac{2}{3} \text{ tam sayılı kesir}$$


$$\frac{7}{4}$$




$$\frac{9}{6}$$




$$\frac{11}{5}$$



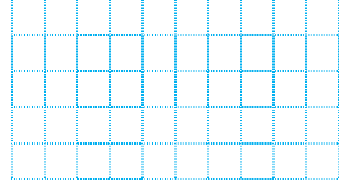
$$\frac{17}{8}$$



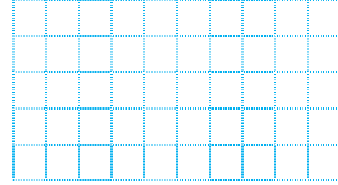
$$\frac{25}{12}$$




$$\frac{34}{11}$$



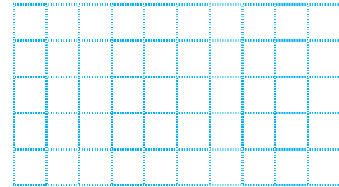
$$\frac{13}{7}$$




$$\frac{19}{4}$$



$$\frac{21}{10}$$



$$\frac{22}{9}$$



$$\frac{43}{8}$$

