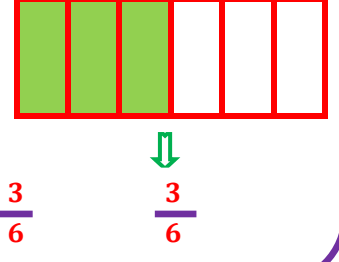
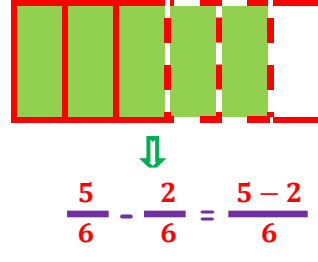
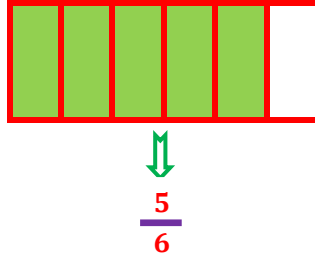




PAYDALARI EŞİT KESİRLERLE ÇIKARMA İŞLEMİ



$$\frac{5}{6} - \frac{2}{6} = ?$$



• Aşağıda verilen kesirleri çıkarınız.

$$\frac{4}{6} - \frac{2}{6} = \frac{4-2}{6} = \frac{2}{6}$$

$$\frac{7}{8} - \frac{4}{8} =$$

$$\frac{10}{12} - \frac{6}{12} =$$

$$\frac{12}{15} - \frac{7}{15} =$$

$$2\frac{6}{9} - 1\frac{2}{9} =$$

$$3\frac{5}{8} - 1\frac{3}{8} =$$

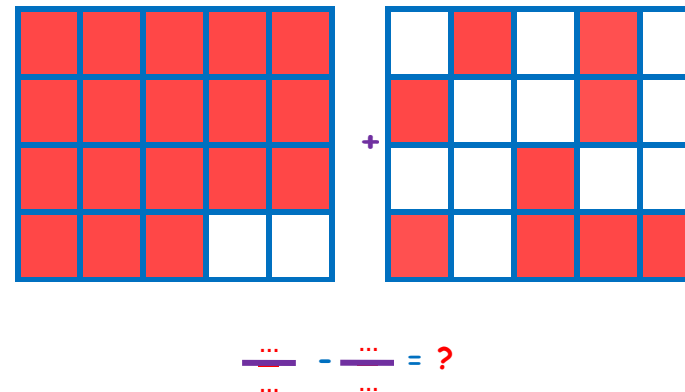
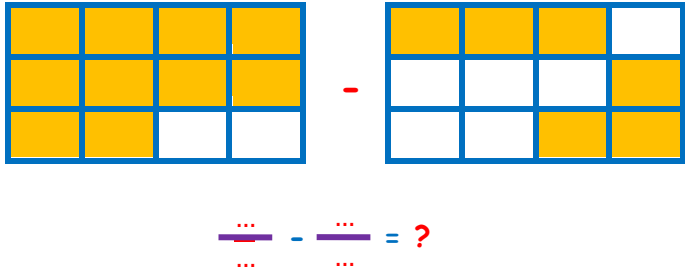
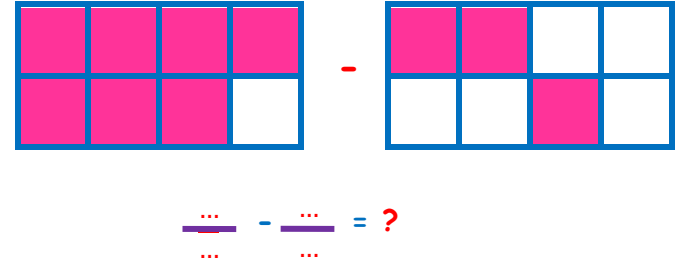
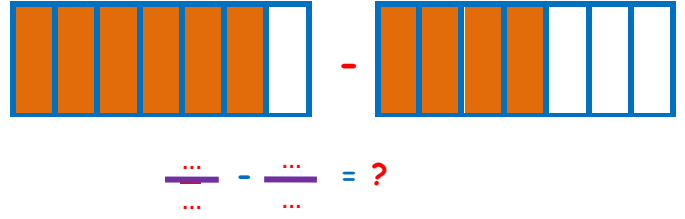
$$\frac{14}{20} - \frac{9}{20} =$$

$$\frac{11}{18} - \frac{7}{18} =$$

$$4\frac{9}{12} - 2\frac{5}{12} =$$

İskender07

• Aşağıda modelle gösterilen kesirlerin toplama işlemini yapınız.



İskender07