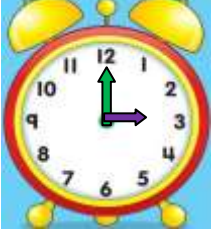


TAM - YARIM - ÇEYREK SAATLERİN OKUNUŞU

- Aşağıda verilen saatlerin kaç gösterdiklerinin okunuşlarını yazınız.



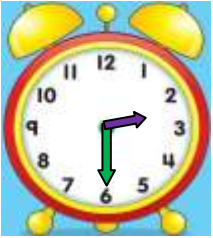
Okunuşu:



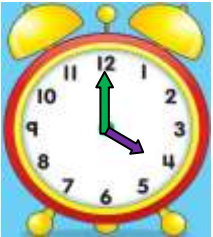
Okunuşu:



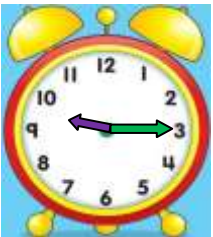
Okunuşu:



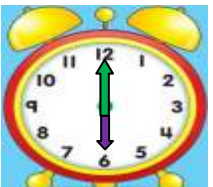
Okunuşu:



Okunuşu:



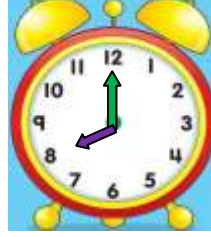
Okunuşu:



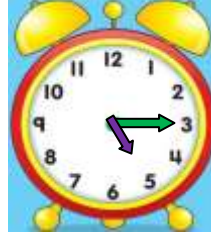
Okunuşu:

İskender07

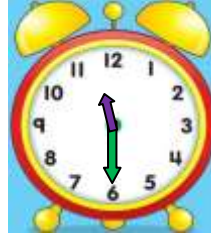
- Aşağıda verilen saatlerin kaç gösterdiklerinin okunuşlarını yazınız.



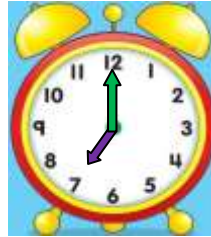
Okunuşu:




Okunuşu:



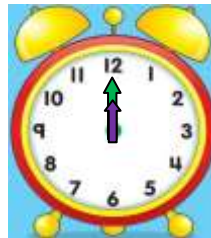
Okunuşu:



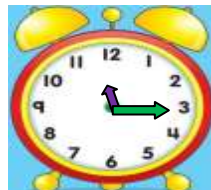
Okunuşu:



Okunuşu:



Okunuşu:



Okunuşu:

İskender07