
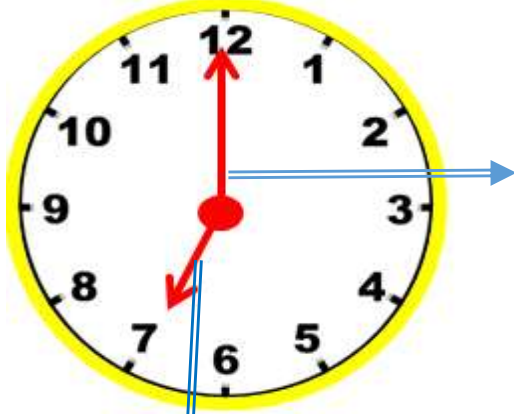


SAATLERİ ÖĞRENİYORUZ



Saat zamanı ölçmeye yarayan alettir. Saatin bir uzun, bir de kısa iki kolu vardır.



Yelkovan

Benim adım yelkovan.

Uzundur boyum.

Hızlı mı hızlı giderim.

Dakikaları göstermektir görevim.

Akrep

Benim adım akrep.

Kısadır boyum.

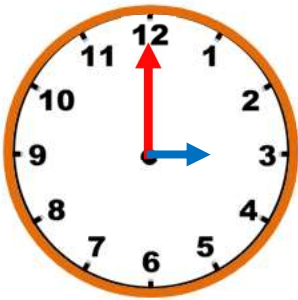
Yavaş yavaş giderim.

Saatleri göstermektir görevim.



Saatleri okurken önce **akrep** hangi rakam üzerinde ona bakıyoruz.

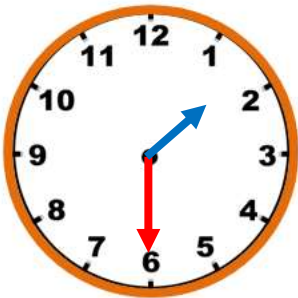
Önce akrebi sonra yelkovanı okuyoruz.



Akrep 3' ün üstünde yelkovan 12' nin üstünde

Saat tam 3' tür.


Saat 03.00



Akrep 1 ve 2' nin arasında yelkovan 6' nın üstünde

Saat bir buçuktur.

Saat kaçı gösteriyorsa akrep ve yelkovanı çizer misin?



Saat: 11.00



Saat: 09.00



Saat: 12.00



Saat: 04.00



Saat: 03.00



Saat: 05.00



Saat: 07.00




Saat: 10.00



Saat: 01.00




Saat: 08.00



Saat: 10.30



Saat: 02.30



Saat: 12.30



Saat: 05.30



Saat: 09.30



Saat: 01.30

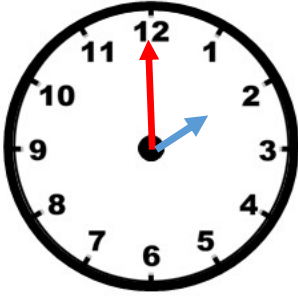


Saat: 08.30

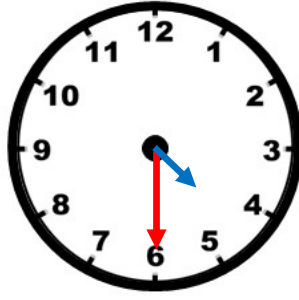


Saat: 03.30

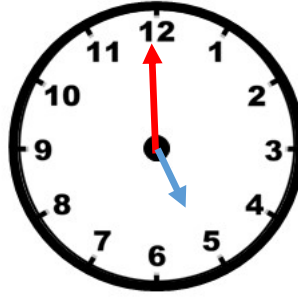
Aşağıdaki saatlerin kaçı gösterdiğini altlarına yazalım.



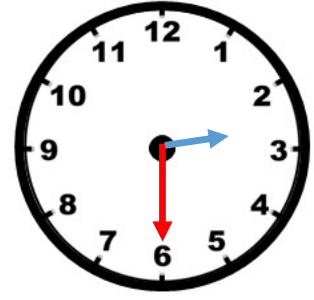
Saat: iki



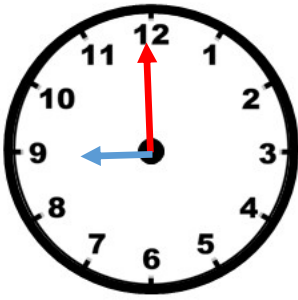
Saat: dört buçuk



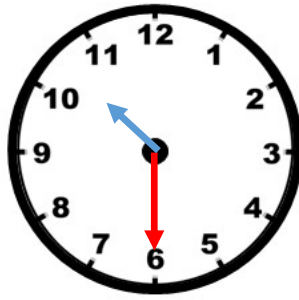
Saat:



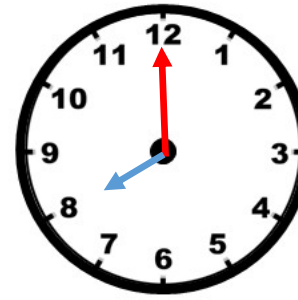
Saat:



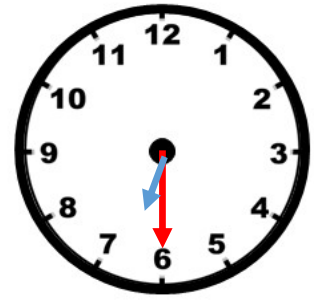
Saat:



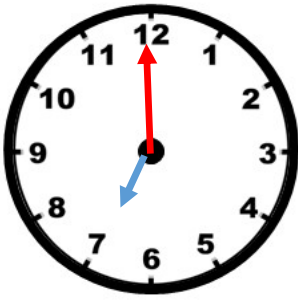
Saat:



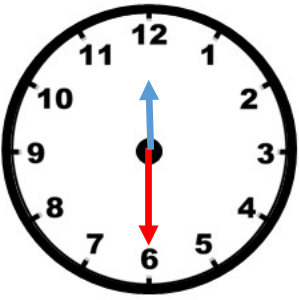
Saat:



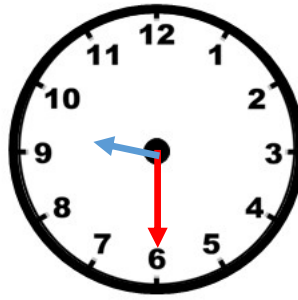
Saat:



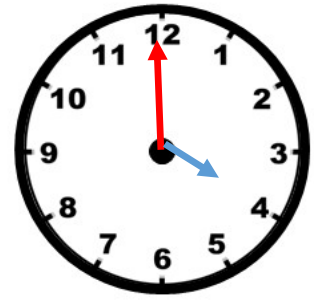
Saat:



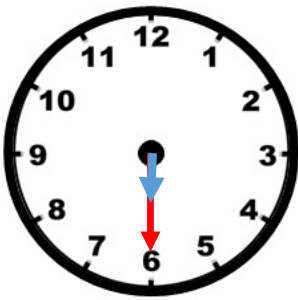
Saat:



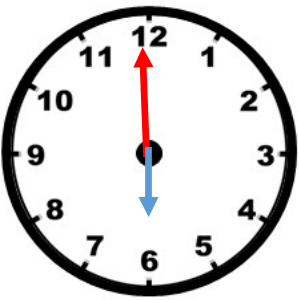
Saat:



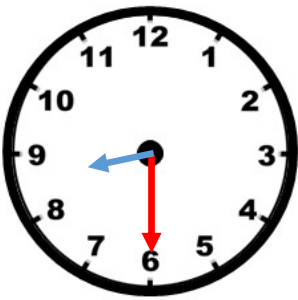
Saat:



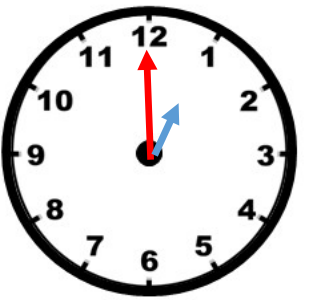
Saat:



Saat:

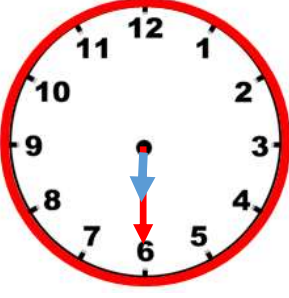


Saat:

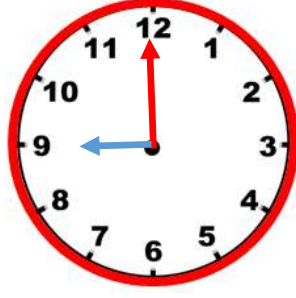


Saat:


Verilen saatlerin akrep ve yelkovanlarını yerleştiriniz.




Saat: altı buçuk




Saat: dokuz




Saat: üç buçuk




Saat: bir




Saat: sekiz buçuk




Saat: dört




Saat: iki




Saat: on iki buçuk




Saat: on bir




Saat: on buçuk




Saat: beş




Saat: on bir buçuk




Saat: bir buçuk



Saat: dokuz buçuk



Saat: yedi



Saat: altı