



KESİRLERİ KARŞILAŞTIRMA VE SIRALAMA 2



- Aşağıda verilen kesirleri büyükten küçüğe doğru sıralayınız.

$$\frac{1}{7} \quad \frac{1}{3} \quad \frac{1}{5} \Rightarrow _ > _ > _$$

$$\frac{1}{6} \quad \frac{1}{9} \quad \frac{1}{2} \Rightarrow _ > _ > _$$

$$\frac{4}{8} \quad \frac{2}{8} \quad \frac{7}{8} \Rightarrow _ > _ > _$$

$$\frac{3}{12} \quad \frac{2}{8} \quad \frac{7}{8} \Rightarrow _ > _ > _$$


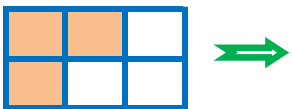

$$1\frac{3}{6} \quad \frac{5}{6} \quad 2\frac{7}{3} \Rightarrow _ > _ > _$$

$$\frac{3}{6} \quad 2\frac{8}{9} \quad 3\frac{1}{5} \Rightarrow _ > _ > _$$

$$1\frac{4}{6} \quad 1\frac{2}{6} \quad 1\frac{5}{6} \Rightarrow _ > _ > _$$

İskender07

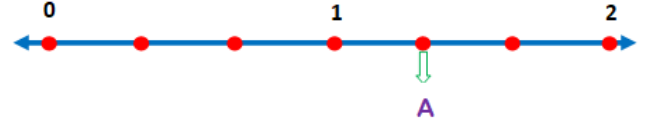
- Aşağıdaki model ile verilen kesirleri küçükten büyüğe doğru sıralayınız.



$_ < _ < _$

İskender07

- Aşağıda sayı doğrusunda verilen A, B, C harflerini büyükten küçüğe doğru sıralayınız. sıralayınız.



$_ > _ > _$

- Aşağıda verilen kesirleri küçükten büyüğe doğru sıralayınız.

$$\frac{1}{9} \quad \frac{1}{2} \quad \frac{1}{6} \Rightarrow _ < _ < _$$

$$\frac{1}{3} \quad \frac{1}{8} \quad \frac{1}{7} \Rightarrow _ < _ < _$$

$$\frac{4}{7} \quad \frac{2}{7} \quad \frac{6}{7} \Rightarrow _ < _ < _$$

$$\frac{9}{15} \quad \frac{14}{15} \quad \frac{10}{15} \Rightarrow _ < _ < _$$

$$1\frac{5}{8} \quad \frac{7}{8} \quad 1\frac{6}{8} \Rightarrow _ < _ < _$$

$$2\frac{6}{12} \quad \frac{11}{12} \quad 2\frac{5}{12} \Rightarrow _ < _ < _$$

İskender07