

Adı soyadı:

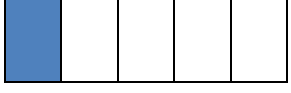
4. Sınıf Günlük Çalışmalar

Birim kesirleri karşılaştırma

★ Payları eşit kesirlerden , paydası küçük olan kesir diğerlerinden büyüktür.

★ Paydaları eşit kesirlerden , payı büyük olan kesir diğerlerinden büyüktür.

örnek




$$\frac{1}{5}$$

$$\frac{1}{4} \gg \frac{1}{5}$$

ya da

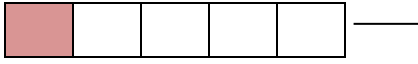


$$\frac{1}{5} \ll \frac{1}{4}$$



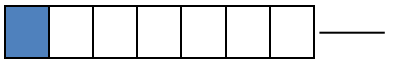

$$\frac{1}{4}$$

Aşağıdaki kesirleri yazarak büyükten küçüğe doğru sıralayınız.




1



2




3



Aşağıdaki kesirleri yazarak küçükten büyüğe doğru sıralayınız.


1



2



3



Aşağıdaki kesirlerden büyükten küçüğe doğru sıralayınız.

$$\frac{1}{12} , \frac{1}{10} , \frac{1}{7} \longrightarrow$$

$$\frac{1}{15} , \frac{1}{11} , \frac{1}{14} \longrightarrow$$

Aşağıdaki kesirleri küçükten büyüğe doğru sıralayınız.

$$\frac{1}{11} , \frac{1}{14} , \frac{1}{7} \longrightarrow$$

$$\frac{1}{12} , \frac{1}{15} , \frac{1}{13} \longrightarrow$$