





## TOPLAMA İŞLEMİ


1. Etkinlik: Aşağıdaki toplama işlemlerinde verilmeyen toplananı yanına işlem yaparak bulunuz.



$$\begin{array}{r} 5 \\ + \square \\ \hline 9 \end{array}$$



$$\begin{array}{r} 8 \\ + \square \\ \hline 14 \end{array}$$



$$\begin{array}{r} 13 \\ + \square \\ \hline 18 \end{array}$$



$$\begin{array}{r} \square \\ + 2 \\ \hline 8 \end{array}$$



$$\begin{array}{r} \square \\ + 4 \\ \hline 12 \end{array}$$



$$\begin{array}{r} \square \\ + 6 \\ \hline 19 \end{array}$$



$$\begin{array}{r} 14 \\ + \square \\ \hline 26 \end{array}$$


$$\begin{array}{r} 27 \\ + \square \\ \hline 45 \end{array}$$




$$\begin{array}{r} 36 \\ + \square \\ \hline 59 \end{array}$$




$$\begin{array}{r} \square \\ + 24 \\ \hline 52 \end{array}$$




$$\begin{array}{r} \square \\ + 38 \\ \hline 64 \end{array}$$




$$\begin{array}{r} \square \\ + 45 \\ \hline 87 \end{array}$$



2. Etkinlik: Aşağıdaki toplama işlemlerinde verilmeyen toplananı altına işlem yaparak bulunuz.



 $3 + \square = 7$ 



 $6 + \square = 10$ 



 $7 + \square = 12$ 



 $\square + 5 = 18$ 



 $\square + 7 = 16$ 



 $\square + 15 = 28$ 


 $26 + \square = 38$ 

 $45 + \square = 62$ 

 $36 + \square = 61$ 

 $\square + 23 = 49$ 

 $\square + 36 = 73$ 

 $\square + 28 = 82$ 