

DOĞAL SAYILAR

1. Etkinlik: Aşağıda onluk ve birlikleri verilen sayıları yazalım.

Onluk	Birlik
.....
.....	

Onluk	Birlik
.....
.....	

Onluk	Birlik
.....
.....	

Onluk	Birlik
.....
.....	

Onluk	Birlik
.....
.....	




Onluk	Birlik
.....
.....	

Onluk	Birlik
.....
.....	

Onluk	Birlik
.....
.....	


Onluk	Birlik
.....
.....	

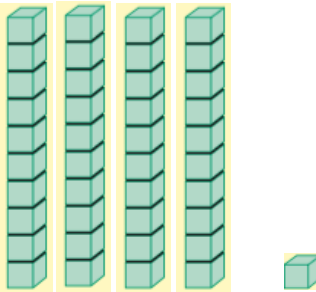


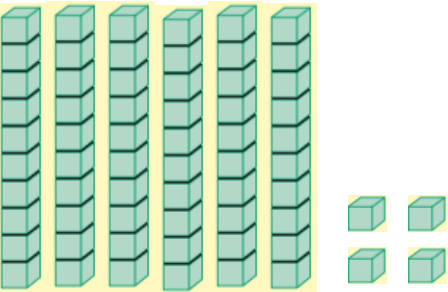
Onluk	Birlik
.....
.....	


Onluk	Birlik
.....
.....	


Onluk	Birlik
.....
.....	

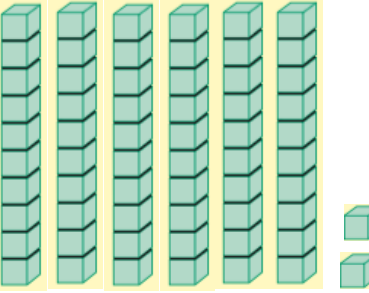
	
Onluk	Birlik
.....
.....	


	
Onluk	Birlik
.....
.....	

	
Onluk	Birlik
.....
.....	

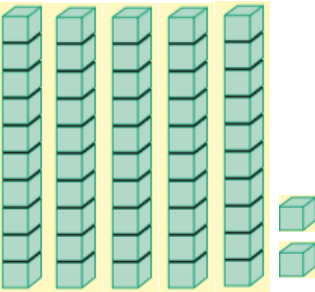



	
Onluk	Birlik
.....
.....	


	
Onluk	Birlik
.....
.....	

	
Onluk	Birlik
.....
.....	



	
Onluk	Birlik
.....
.....	

	
Onluk	Birlik
.....
.....	

	
Onluk	Birlik
.....
.....	