



TOPLAMA İŞLEMİ

1. Etkinlik: Aşağıdaki toplama işlemlerinde verilmeyen toplananı yanına işlem yaparak bulunuz.




$$\begin{array}{r} 3 \\ + \square \\ \hline 8 \end{array}$$

i




$$\begin{array}{r} 7 \\ + \square \\ \hline 15 \end{array}$$

Ğ




$$\begin{array}{r} 16 \\ + \square \\ \hline 19 \end{array}$$

M




$$\begin{array}{r} \square \\ + 4 \\ \hline 10 \end{array}$$

Y




$$\begin{array}{r} \square \\ + 8 \\ \hline 24 \end{array}$$

N




$$\begin{array}{r} \square \\ + 9 \\ \hline 27 \end{array}$$

Z




$$\begin{array}{r} 34 \\ + \square \\ \hline 94 \end{array}$$

S




$$\begin{array}{r} 32 \\ + \square \\ \hline 78 \end{array}$$

A




$$\begin{array}{r} 47 \\ + \square \\ \hline 80 \end{array}$$

E




$$\begin{array}{r} \square \\ + 37 \\ \hline 99 \end{array}$$

I



$$\begin{array}{r} \square \\ + 56 \\ \hline 83 \end{array}$$


T



$$\begin{array}{r} \square \\ + 27 \\ \hline 72 \end{array}$$

U





$$\begin{array}{r} \square \\ + 36 \\ \hline 85 \end{array}$$

C





46	27	46	3
...


60	33	16	5
...


45	16	45	27	3	46	6	46	49	46	8	62	18
...


2. Etkinlik: Aşağıdaki toplama işlemlerinde verilmeyen toplananı altına işlem yaparak bulunuz.





$$70 + \square = 90$$






$$8 + \square = 24$$






$$40 + \square = 70$$






$$\square + 13 = 56$$






$$\square + 30 = 80$$






$$\square + 27 = 73$$




$$20 + \square = 60$$




$$54 + \square = 97$$




$$19 + \square = 53$$
