


Adı Soyadı:

1.Sınıf Matematik Zaman Ölçüleri (Tam -Yarım Saatler) 2


Aşağıdaki okunuşlarını verilen saatleri yelkovan ve akrep kullanarak gösterelim.




Saat 4



Saat 7




Saat 11




Saat 6




Saat dokuz



Saat 10



Saat 12




Saat altı


Aşağıdaki okunuşlarını verilen saatleri yelkovan ve akrep kullanarak gösterelim.



Saat üç buçuk



Saat beş buçuk



Saat 12 buçuk



Saat altı buçuk



Saat sekiz buçuk



Saat 10 buçuk