

ADI SOYADI:

Bölme işlemlerini yapalım

$$\begin{array}{r} 6 \overline{) 3} \\ \underline{} \\ \end{array}$$

$$\begin{array}{r} 6 \overline{) 2} \\ \underline{} \\ \end{array}$$

$$\begin{array}{r} 10 \overline{) 5} \\ \underline{} \\ \end{array}$$

$$\begin{array}{r} 9 \overline{) 3} \\ \underline{} \\ \end{array}$$

$$\begin{array}{r} 10 \overline{) 5} \\ \underline{} \\ \end{array}$$

$$\begin{array}{r} 12 \overline{) 2} \\ \underline{} \\ \end{array}$$

$$\begin{array}{r} 10 \overline{) 5} \\ \underline{} \\ \end{array}$$

$$\begin{array}{r} 14 \overline{) 2} \\ \underline{} \\ \end{array}$$

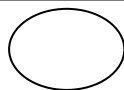
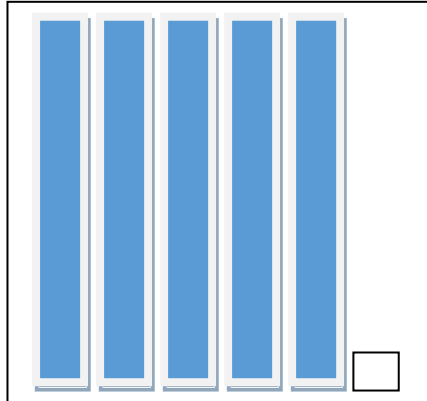
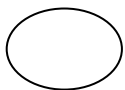
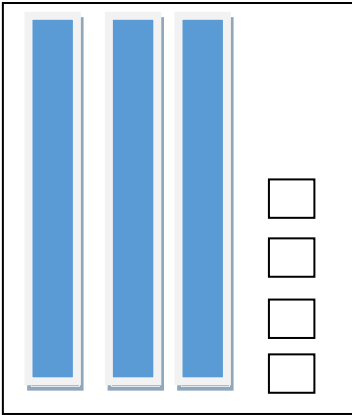
$$\begin{array}{r} 16 \overline{) 4} \\ \underline{} \\ \end{array}$$

$$\begin{array}{r} 12 \overline{) 4} \\ \underline{} \\ \end{array}$$

$$\begin{array}{r} 6 \overline{) 2} \\ \underline{} \\ \end{array}$$

$$\begin{array}{r} 12 \overline{) 4} \\ \underline{} \\ \end{array}$$

Onluk bloklarla gösterilen sayıları yazalım



MINI TEST


9 un 3 katının 20 fazlası kaçtır?

- A) 27 B) 37 C) 47

Saat 15 . 15


Yukarıdaki saatin 15 dakika sonrası kaçtır?

- A) 15 . 30
B) 15 . 45
C) 16 . 30



Yukarıdaki görsel sayısının 5 e bölümünde bölüm kaçtır?

- A) 5 B) 6 C) 7



Yukarıdaki çiçek dörderli olarak vazolara konduğunda kaç vazo kullanılır?

- A) 10 B) 8 C) 6

2020	P	S	Ç	P	C	Cm	P
MAY						1	2
	3	4	5	6	7	8	9
	10	11	12	13	14	15	16
	17	18	19	20	21	22	23
	24	25	26	27	28	29	30

Cuma gününe denk gelen tarihler hangileridir?

- A) 4 - 11 - 18 - 25
B) 7 - 14 - 21 - 28
C) 5 - 12 - 19 - 26

İşlem sonuçlarını yazalım, sonuçları büyükten küçüğe doğru sıralayalım

1



$$32 - 9 = \underline{23}$$

$$42 - 7 = \underline{35}$$

$$52 - 5 = \underline{47}$$

47 , 35 , 23

2



$$66 - 13 = \underline{\quad}$$

$$65 + 8 = \underline{\quad}$$

$$64 - 22 = \underline{\quad}$$

3



$$85 - 43 = \underline{\quad}$$

$$66 - 9 = \underline{\quad}$$

$$47 + 5 = \underline{\quad}$$

4



$$12 - 4 = \underline{\quad}$$

$$22 - 7 = \underline{\quad}$$

$$32 : 4 = \underline{\quad}$$

5



$$63 - 5 = \underline{\quad}$$

$$43 - 18 = \underline{\quad}$$

$$23 + 8 = \underline{\quad}$$

6

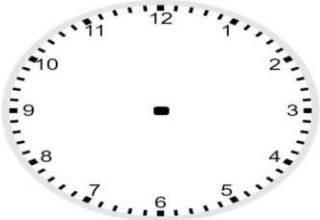


$$77 + 6 = \underline{\quad}$$

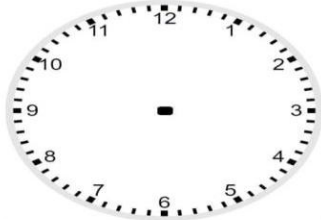
$$76 - 30 = \underline{\quad}$$

$$5 \times 6 = \underline{\quad}$$

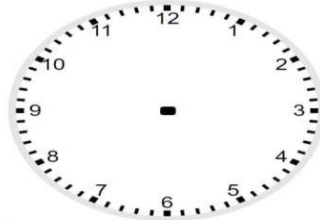
Verilen zamanları saatler üzerinde gösterelim



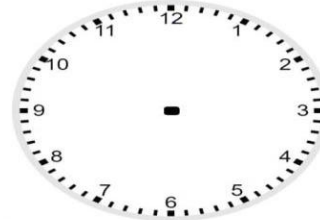
08:00



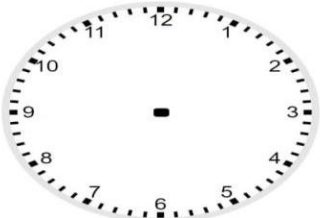
07:15



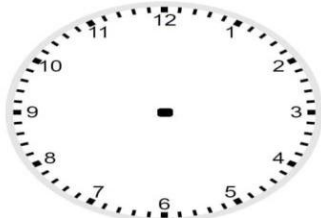
06:00



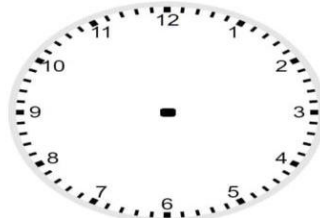
08:15



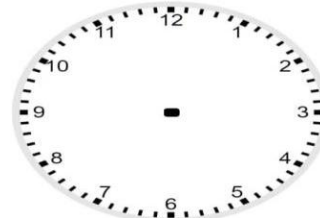
09:45



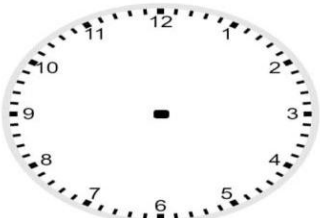
20:30



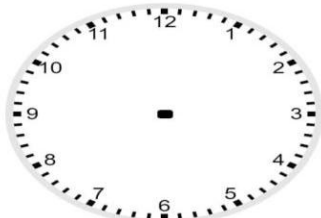
19:30



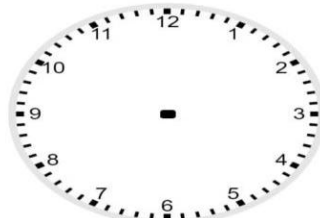
04:15



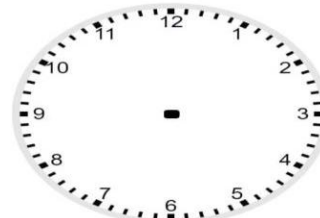
01:15



08:30



01:00



17:00