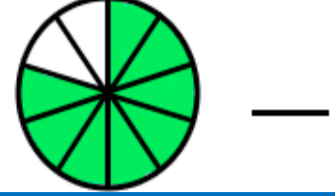
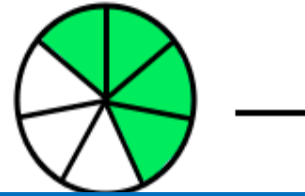
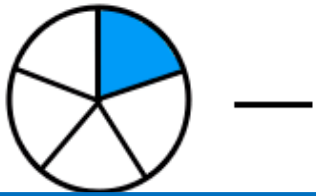
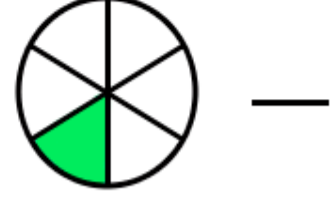
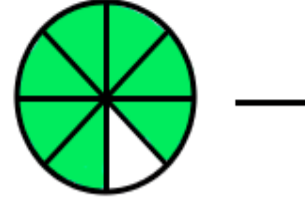
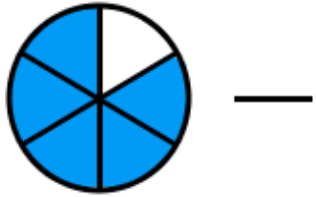
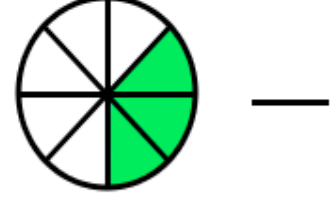
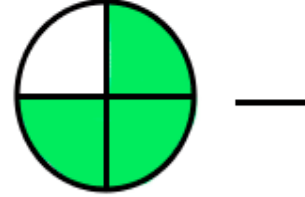
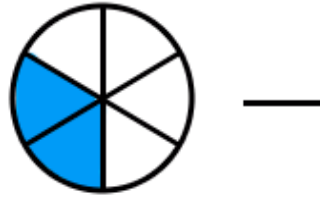
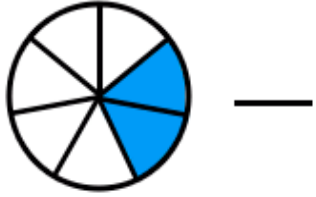
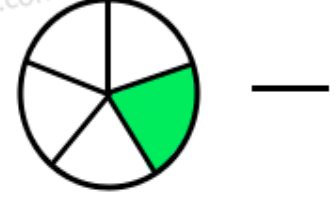
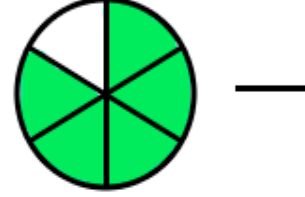
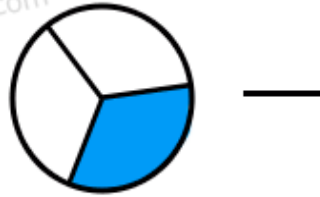
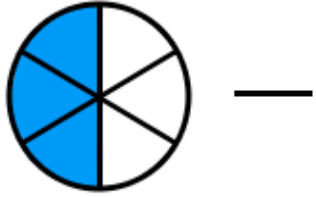
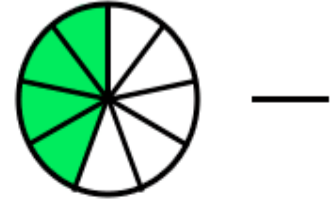
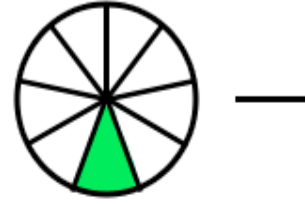
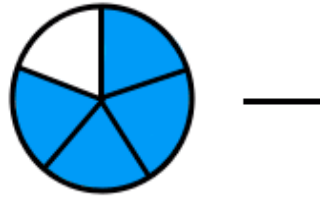
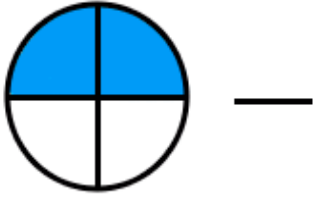
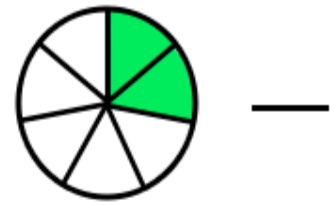
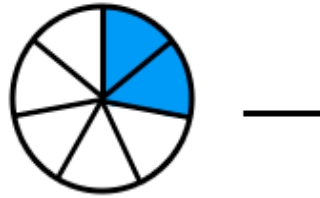
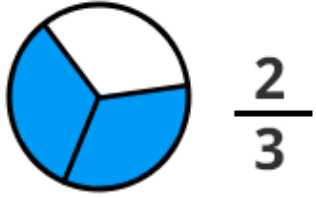
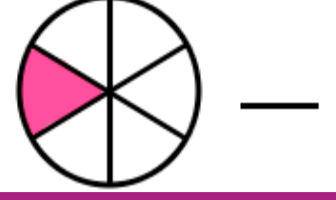
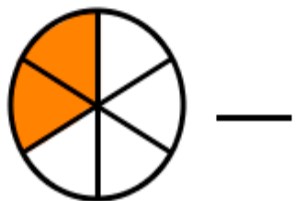
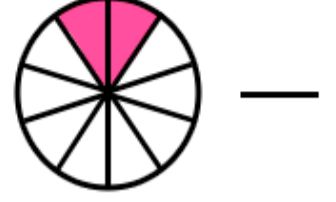
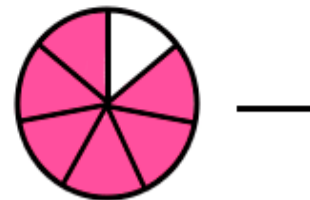
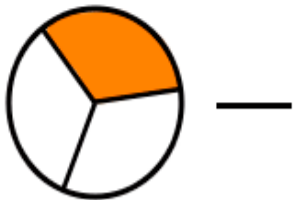
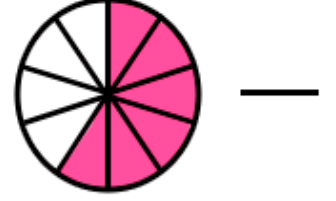
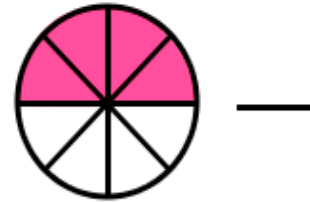
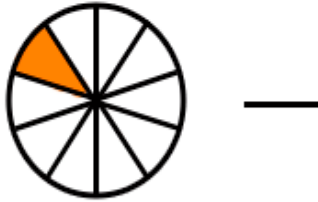
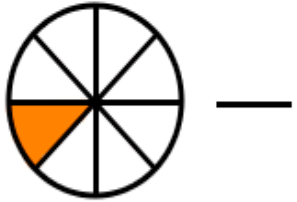
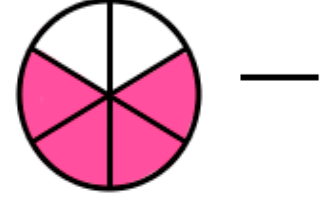
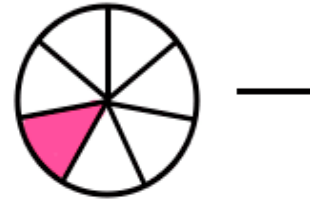
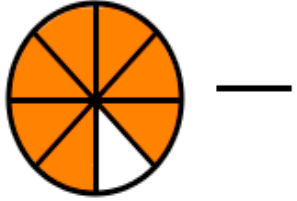
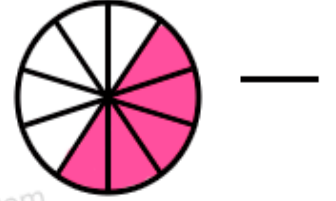
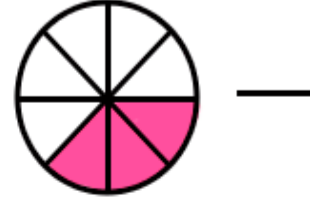

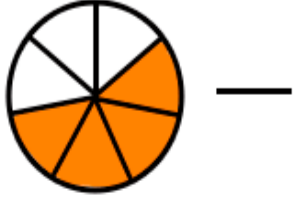
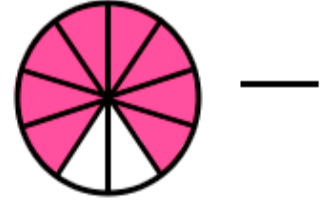
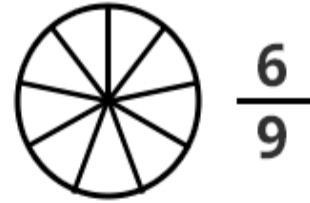
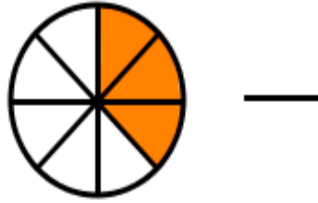
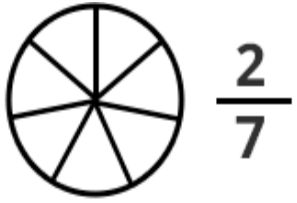



Aşağıda modellenen şekillerde boyalı kısma karşılık gelen kesirleri yazınız.



Aşağıda modellenen şekillerde boyalı kısma karşılık gelen kesirleri yazınız.



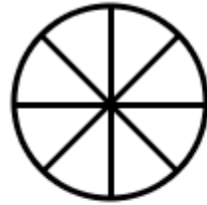
Aşağıdaki şekillerin belirtilen kesir kadarını boyayınız.



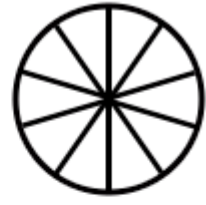
$$\frac{1}{2}$$



$$\frac{1}{3}$$



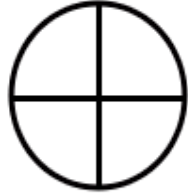
$$\frac{6}{8}$$



$$\frac{4}{10}$$



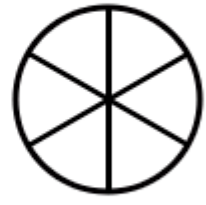
$$\frac{3}{6}$$



$$\frac{2}{4}$$



$$\frac{4}{5}$$



$$\frac{5}{6}$$



$$\frac{2}{5}$$



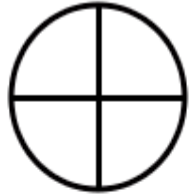
$$\frac{5}{6}$$



$$\frac{3}{9}$$



$$\frac{5}{7}$$



$$\frac{3}{4}$$



$$\frac{3}{5}$$



$$\frac{7}{10}$$



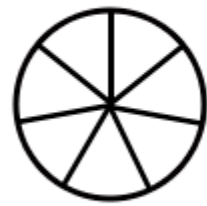
$$\frac{1}{5}$$



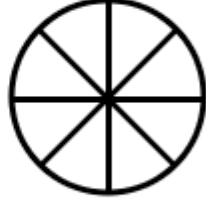
$$\frac{2}{3}$$




$$\frac{4}{6}$$



$$\frac{2}{7}$$



$$\frac{3}{8}$$



$$\frac{1}{4}$$



$$\frac{4}{5}$$



$$\frac{1}{6}$$

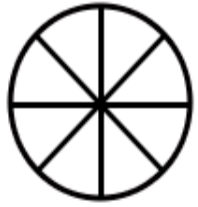


$$\frac{6}{9}$$

edufichas.com

edufichas.com

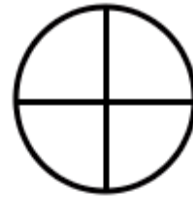
Aşağıdaki şekillerin belirtilen kesir kadarını boyayınız.



$$\frac{2}{8}$$



$$\frac{1}{5}$$



$$\frac{2}{4}$$



$$\frac{1}{7}$$



$$\frac{4}{7}$$



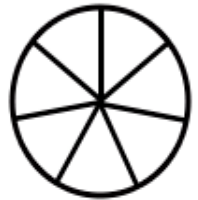
$$\frac{5}{8}$$



$$\frac{5}{6}$$




$$\frac{3}{5}$$



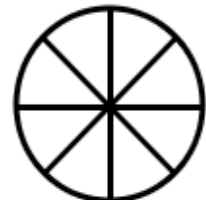
$$\frac{5}{7}$$



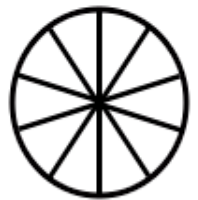
$$\frac{4}{6}$$



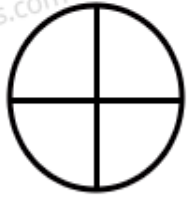
$$\frac{5}{9}$$



$$\frac{7}{8}$$




$$\frac{3}{10}$$



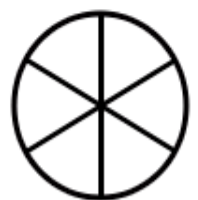
$$\frac{1}{4}$$



$$\frac{1}{3}$$



$$\frac{1}{2}$$



$$\frac{1}{6}$$



$$\frac{9}{10}$$



$$\frac{2}{7}$$



$$\frac{8}{9}$$



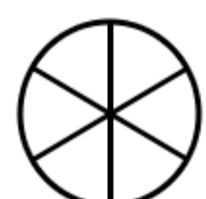
$$\frac{7}{8}$$



$$\frac{6}{8}$$



$$\frac{1}{5}$$



$$\frac{6}{6}$$

Aşağıda modellenen şekillerde boyalı kısma karşılık gelen kesirle eşleştiriniz.



$$\frac{1}{4}$$

$$\frac{2}{6}$$

$$\frac{2}{7}$$

$$\frac{4}{5}$$

$$\frac{2}{3}$$

$$\frac{3}{4}$$



$$\frac{5}{9}$$

$$\frac{2}{6}$$

$$\frac{2}{8}$$

$$\frac{3}{5}$$

$$\frac{4}{10}$$

$$\frac{3}{6}$$

edufichas.com

edufichas.com

Aşağıda modellenen şekillerde boyalı kısma karşılık gelen kesirle eşleştiriniz.



$$\frac{1}{8}$$

$$\frac{3}{7}$$

$$\frac{1}{7}$$

$$\frac{2}{10}$$

$$\frac{1}{9}$$

$$\frac{3}{9}$$



$$\frac{4}{6}$$

$$\frac{4}{7}$$

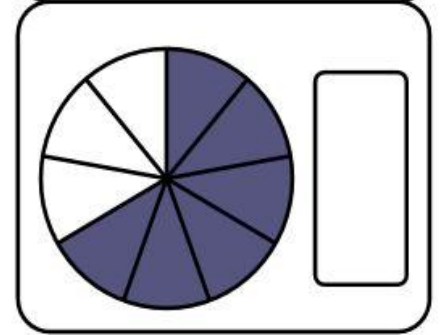
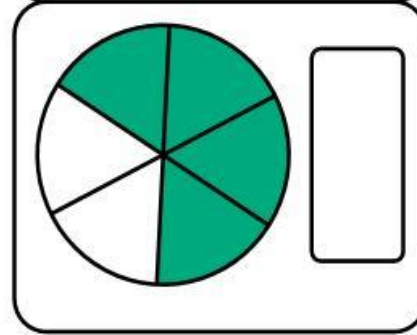
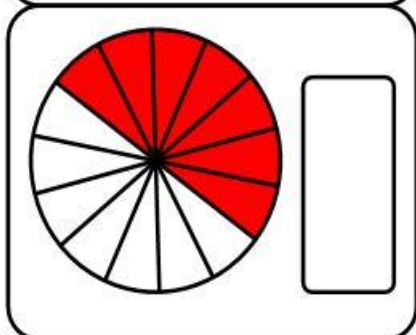
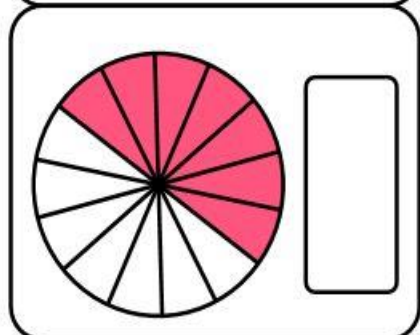
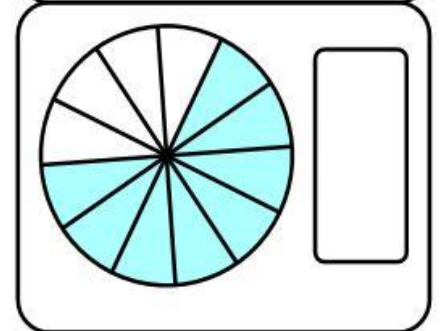
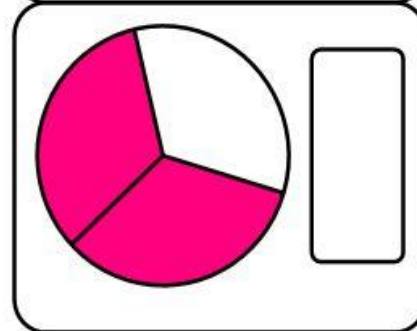
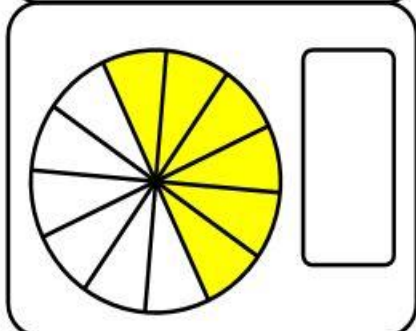
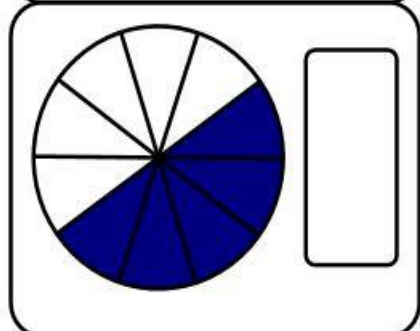
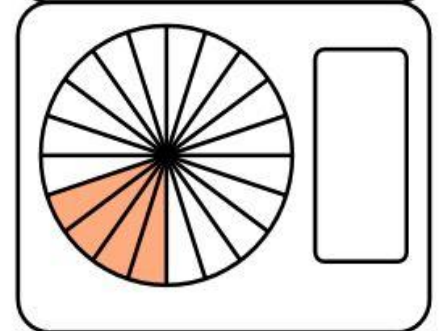
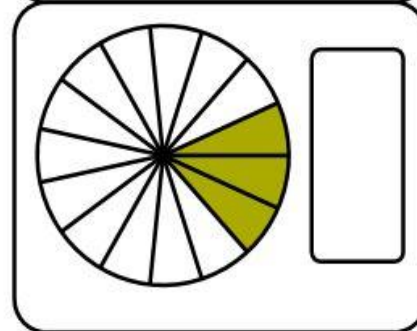
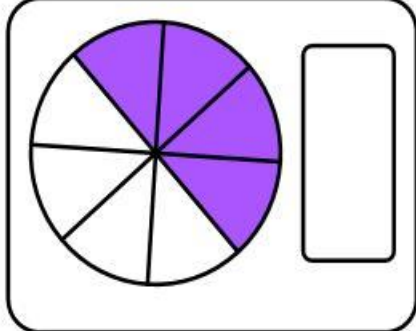
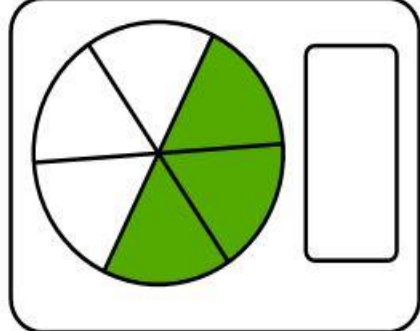
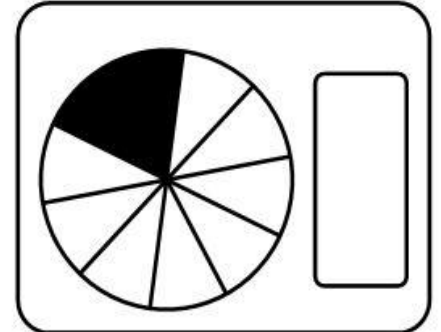
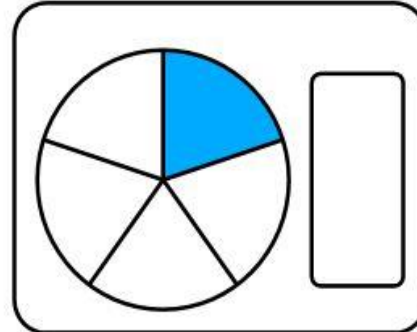
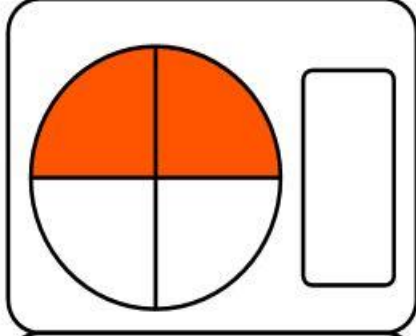
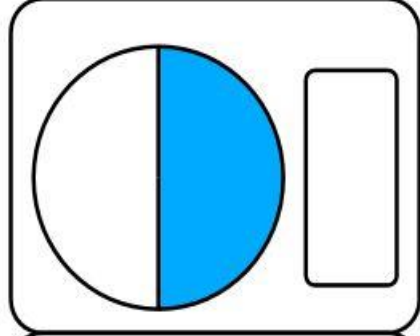
$$\frac{5}{7}$$

$$\frac{4}{8}$$

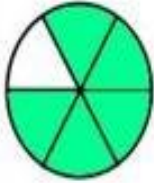
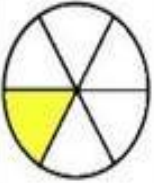





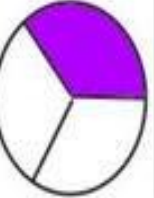

$$\frac{5}{8}$$

$$\frac{5}{6}$$

Aşağıda modellenen şekillerde boyalı kısma karşılık gelen kesirleri yazınız.

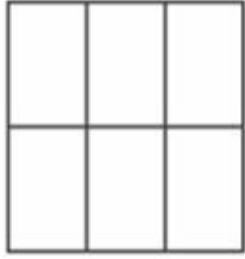


Aşağıdaki şekillere karşılık gelen kesirleri işaretleyelim.


1)		$\frac{1}{2}$	$\frac{3}{6}$	$\frac{5}{6}$	$\frac{1}{6}$	$\frac{6}{5}$
2)		$\frac{1}{4}$	$\frac{3}{4}$	$\frac{1}{6}$	$\frac{1}{3}$	$\frac{1}{5}$
3)		$\frac{1}{2}$	$\frac{3}{8}$	$\frac{1}{6}$	$\frac{1}{7}$	$\frac{6}{8}$
4)		$\frac{1}{3}$	$\frac{3}{6}$	$\frac{1}{2}$	$\frac{1}{5}$	$\frac{1}{4}$
5)		$\frac{4}{6}$	$\frac{5}{6}$	$\frac{4}{5}$	$\frac{1}{6}$	$\frac{3}{5}$
6)		$\frac{1}{3}$	$\frac{1}{4}$	$\frac{1}{2}$	$\frac{1}{5}$	$\frac{2}{1}$
7)		$\frac{1}{2}$	$\frac{3}{4}$	$\frac{5}{6}$	$\frac{1}{4}$	$\frac{4}{3}$
8)		$\frac{1}{6}$	$\frac{2}{3}$	$\frac{3}{3}$	$\frac{1}{3}$	$\frac{2}{5}$
9)		$\frac{3}{5}$	$\frac{3}{4}$	$\frac{5}{4}$	$\frac{4}{6}$	$\frac{4}{5}$

Aşağıdaki şekillerin istenilen kadarını boyayınız.

$$\frac{3}{6}$$



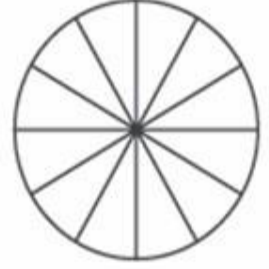
$$\frac{1}{4}$$




$$\frac{6}{8}$$



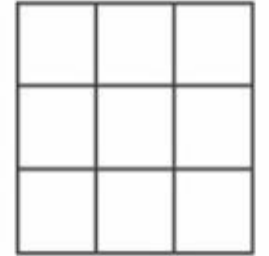
$$\frac{10}{12}$$



$$\frac{8}{10}$$



$$\frac{7}{9}$$



$$\frac{4}{7}$$



$$\frac{2}{5}$$

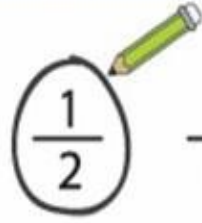


Aşağıdaki şekillere karşılık gelen kesirleri işaretleyelim.



$\frac{3}{1}$

$\frac{2}{1}$



$\frac{1}{2}$

$\frac{3}{2}$



$\frac{3}{1}$

$\frac{6}{5}$

$\frac{6}{7}$

$\frac{5}{6}$



$\frac{1}{3}$

$\frac{3}{1}$

$\frac{2}{3}$

$\frac{4}{1}$



$\frac{4}{6}$

$\frac{5}{4}$

$\frac{3}{5}$

$\frac{5}{3}$



$\frac{6}{8}$

$\frac{5}{8}$

$\frac{8}{5}$

$\frac{5}{7}$



$\frac{4}{1}$

$\frac{1}{4}$

$\frac{1}{3}$

$\frac{3}{4}$



$\frac{4}{10}$

$\frac{5}{12}$

$\frac{3}{11}$

$\frac{3}{10}$



$\frac{4}{8}$

$\frac{7}{4}$

$\frac{4}{6}$

$\frac{4}{7}$



$\frac{4}{10}$

$\frac{5}{12}$

$\frac{4}{14}$

$\frac{6}{12}$



$\frac{1}{2}$

$\frac{3}{6}$

$\frac{6}{4}$

$\frac{4}{6}$