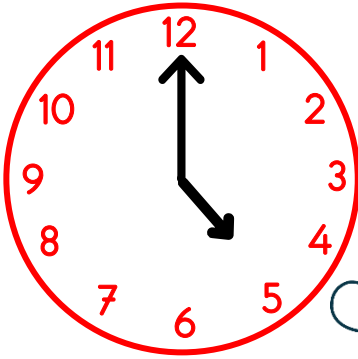


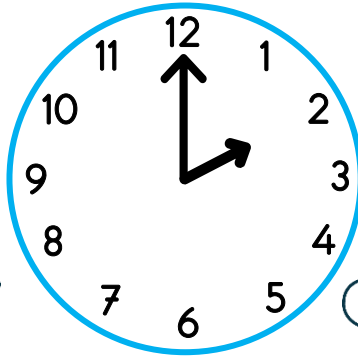
Saat **04:00**

- ❓ Saatte bulunan uzun çubuğa **yelkovan**, kısa çubuğa ise **akrep** denir.
- ❓ Yelkovan dakikayı, akrep ise saat kısmını gösterir.
- ❓ Bir saat 60 dakikadır.
- ❓ Yelkovan 12'nin üstüneyken saat, tam saati gösterir


▶ Aşağıdaki saatleri, öğleden önce ve öğleden sonra şeklinde örnekteki gibi yazalım.




SAAT: **05:00**




SAAT: .....




SAAT: .....



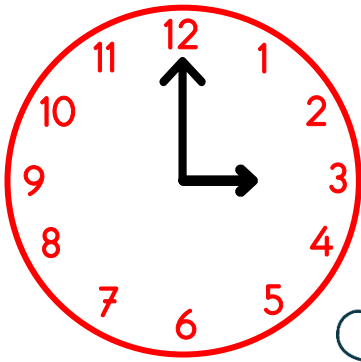
SAAT: .....



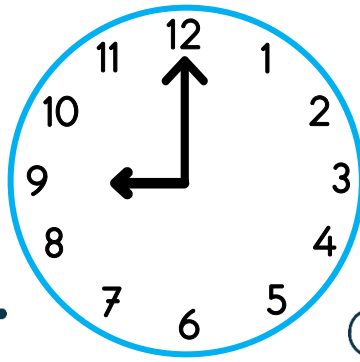
SAAT: .....




SAAT: .....




SAAT: .....



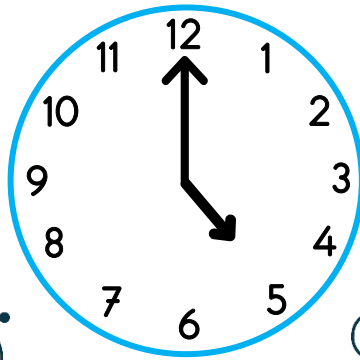
SAAT: .....




SAAT: .....



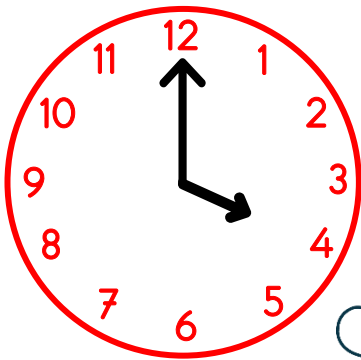
SAAT: .....




SAAT: .....




SAAT: .....



SAAT: .....



SAAT: .....



SAAT: .....