








GEOMETRİK ŞEKİLLERİ ÖĞRENIYORUM-2

Sol tarafta verilen bilgilere uygun olan geometrik şekli bulup boyayınız.





Üç kenarım,
Üç köşem vardır.



Dört köşem,
Dört kenarım vardır.
Kenarlarım eşittir.



Dört kenarım,
Dört köşem vardır.
İki kenarım uzun,
İki kenarım kısadır.



Yuvarlağım,
Hiç köşem ve
Kenarım yoktur.

