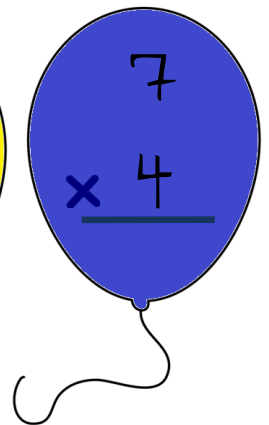
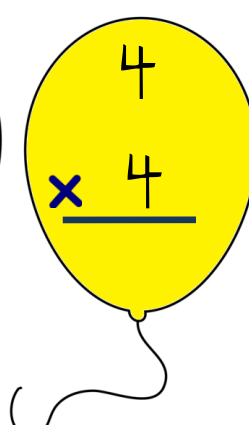
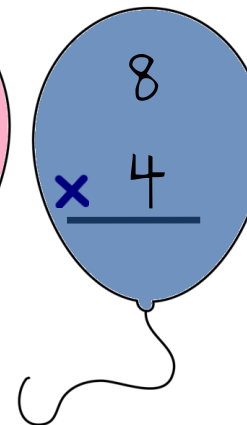
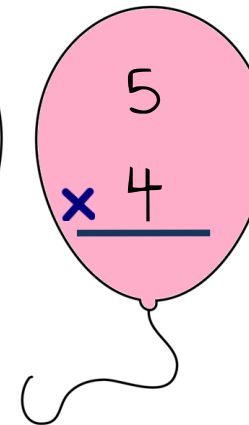

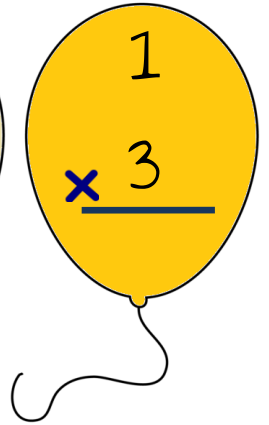
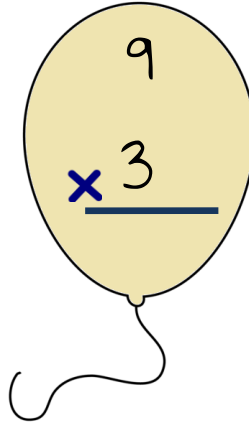
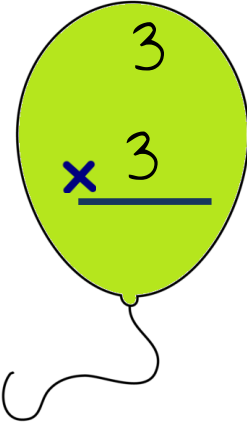
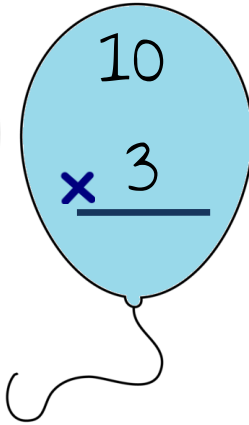
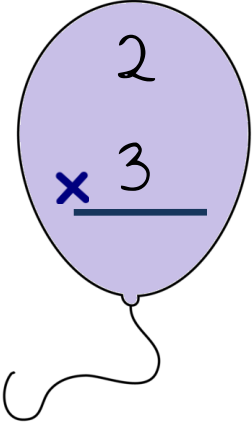
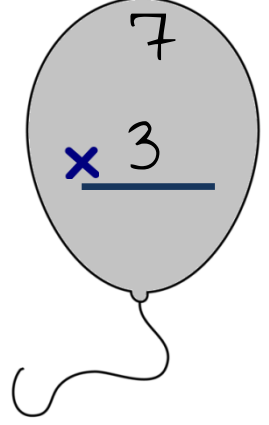

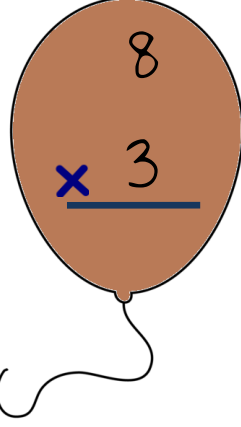
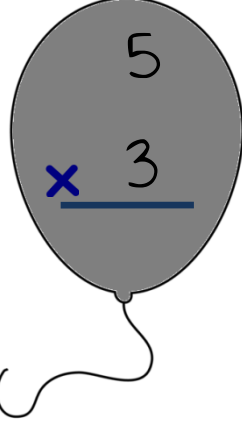
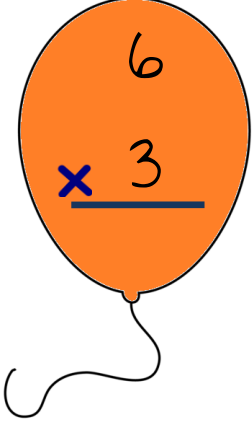


HANGİ BALON SENİN ?

Çarpma işlemlerini yaparak balonları al. Kolay gelsin. ☺



$$\begin{array}{r} 9 \\ \times 4 \\ \hline \end{array}$$

$$\begin{array}{r} 3 \\ \times 4 \\ \hline \end{array}$$

$$\begin{array}{r} 1 \\ \times 4 \\ \hline \end{array}$$

$$\begin{array}{r} 2 \\ \times 4 \\ \hline \end{array}$$

$$\begin{array}{r} 10 \\ \times 4 \\ \hline \end{array}$$

$$\begin{array}{r} 2 \\ \times 5 \\ \hline \end{array}$$

$$\begin{array}{r} 10 \\ \times 5 \\ \hline \end{array}$$

$$\begin{array}{r} 3 \\ \times 5 \\ \hline \end{array}$$

$$\begin{array}{r} 9 \\ \times 5 \\ \hline \end{array}$$

$$\begin{array}{r} 1 \\ \times 5 \\ \hline \end{array}$$

$$\begin{array}{r} 6 \\ \times 5 \\ \hline \end{array}$$

$$\begin{array}{r} 5 \\ \times 5 \\ \hline \end{array}$$

$$\begin{array}{r} 8 \\ \times 5 \\ \hline \end{array}$$

$$\begin{array}{r} 4 \\ \times 5 \\ \hline \end{array}$$

$$\begin{array}{r} 7 \\ \times 5 \\ \hline \end{array}$$

$5 \times 0 =$

$5 \times 1 =$



$4 \times 0 =$

$4 \times 1 =$

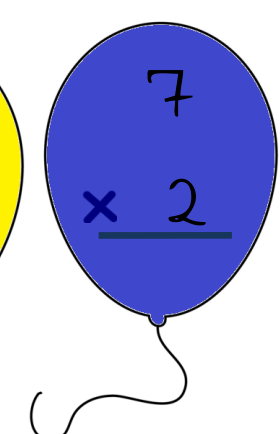
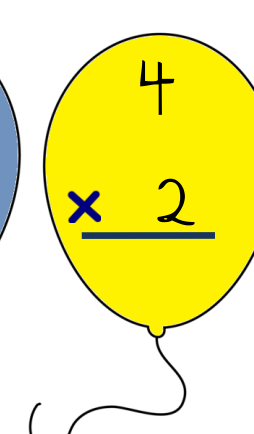
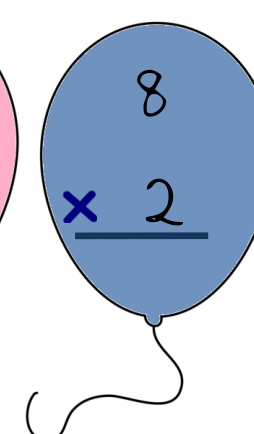
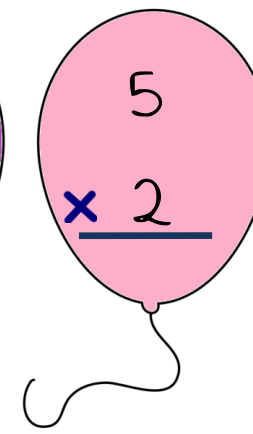
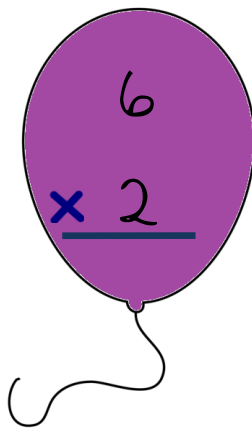

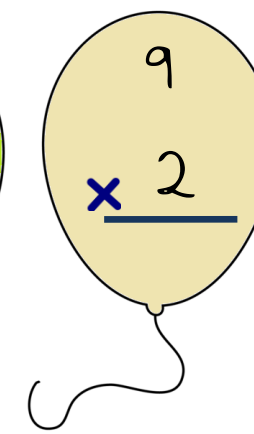
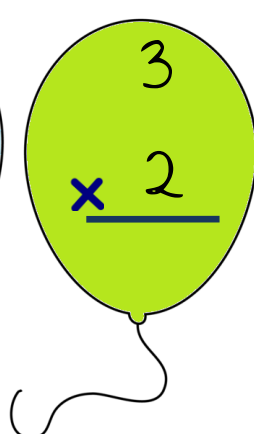
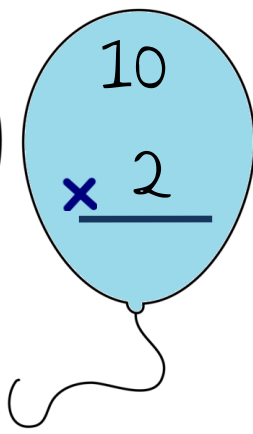
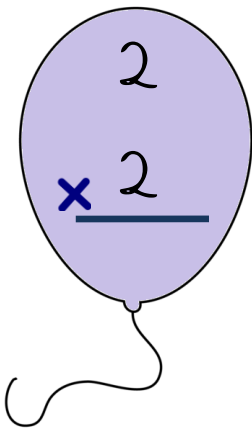


$10 \times 0 =$

$10 \times 1 =$

$3 \times 0 =$

$3 \times 1 =$



$2 \times 0 =$

$2 \times 1 =$



Çalışmalarımıza destek olmak için,

<https://www.etkinlikburada.com/>

Sayfasından ücretsiz üye olup,

[https://www.etkinlikburada.com/kanal.](https://www.etkinlikburada.com/kanal.php?ch-name=mehmet-ogretmen)

[php?ch-name=mehmet-ogretmen](https://www.etkinlikburada.com/kanal.php?ch-name=mehmet-ogretmen)

kanalımızı takip edebilirsiniz.

Sizlerin desteği ile çok daha fazla

sayıda güncel ve farklı içerikler

üretmekteyiz.

Desteklerinizi bekliyoruz...

