

ADI SOYADI:




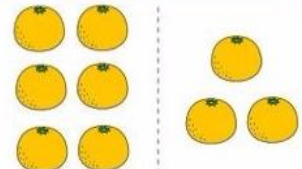


Toplam 5 olacak şekilde boşlukları dolduralım

+		=	5
+		=	5
+		=	5
+		=	5
+		=	5
+		=	5
+		=	5


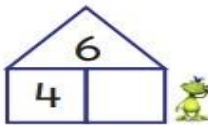
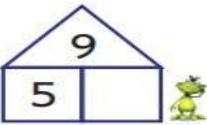
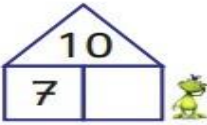
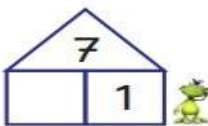
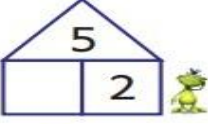
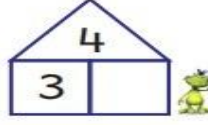
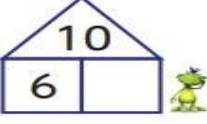
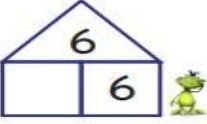
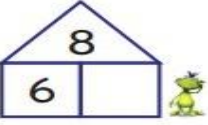
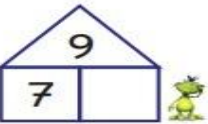
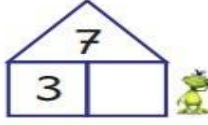
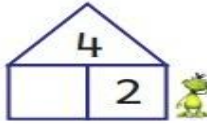
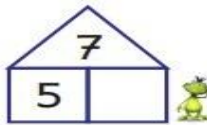

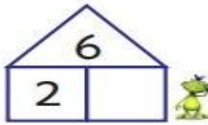
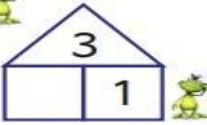
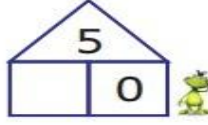
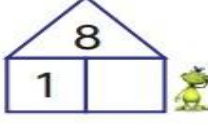
5	+		=	5
	+	3	=	5
	+	4	=	5
0	+		=	5
4	+		=	5
	+	2	=	5



Toplama işlemi sonuçlarını yazalım

 $3 + 4 = \square$	 $4 + 4 = \square$
 $3 + 3 = \square$	 $6 + 3 = \square$
 $4 + 6 = \square$	 $2 + 4 = \square$

Ev çatlarındaki toplamlara göre eksik sayıları yazalım

Toplama işlemi sonuçlarını yazalım

	+		=	
	+		=	
	+		=	
	+		=	
	+		=	
	+		=	
	+		=	
	+		=	
	+		=	
	+		=	

Toplamlara göre eksik sayıları yazalım
