



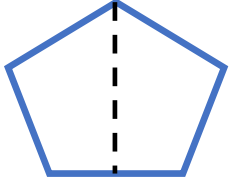
# BÜTÜN - YARIM



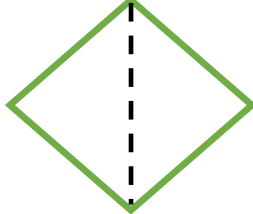
**Bütün:** Bir varlığın kendisine **bütün** denir.

**Yarım:** Bütünün iki eş parçasından her birine **yarım** denir.

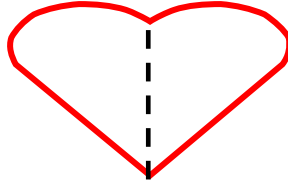
1-) Aşağıda verilen şekillerin istenen parçalarını boyayalım.



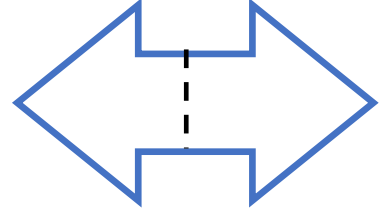
yarım




bütün




yarım



bütün



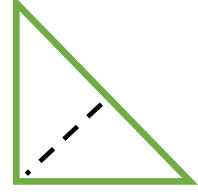
bütün



yarım




bütün



yarım


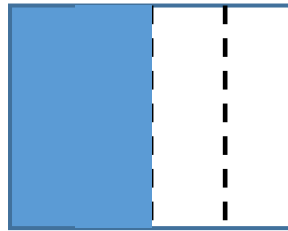


2-) Aşağıda verilmiş olan nesnelere bakarak **bütün** , **yarım** şeklinde eşleştirin.



yarım

bütün

3-) Aşağıdaki şekillerin boyanan kadarını bütün, yarım, şeklinde ismini altına yazınız.



.....

.....

.....

.....