













EN YAKIN ONLUĞA YUVARLAMA

1. Etkinlik: Aşağıda verilen sayıları yuvarlanacağı sayıların altına yazalım.



10



20




30



40



50



60



70



80



90



2. Etkinlik: Aşağıda verilen sayılardan hangileri üstündeki onluğa yuvarlanır işaretleyelim.

40

	38
	45
	33
	42

70

	64
	71
	69
	75

20

	24
	17
	26
	12

90

	96
	83
	93
	89

60

	67
	58
	61
	54

30

	39
	34
	23
	29

50

	52
	47
	41
	59