





## TOPLAMA İŞLEMİ


\* Aşağıdaki toplama işlemlerinde verilmeyen toplananı yanına işlem yaparak bulunuz.




$$\begin{array}{r} 5 \\ + \square \\ \hline 9 \end{array}$$




$$\begin{array}{r} 8 \\ + \square \\ \hline 14 \end{array}$$




$$\begin{array}{r} 13 \\ + \square \\ \hline 18 \end{array}$$




$$\begin{array}{r} \square \\ + 2 \\ \hline 8 \end{array}$$




$$\begin{array}{r} \square \\ + 4 \\ \hline 12 \end{array}$$




$$\begin{array}{r} \square \\ + 6 \\ \hline 19 \end{array}$$




$$\begin{array}{r} 14 \\ + \square \\ \hline 26 \end{array}$$




$$\begin{array}{r} 27 \\ + \square \\ \hline 45 \end{array}$$




$$\begin{array}{r} 36 \\ + \square \\ \hline 59 \end{array}$$



$$\begin{array}{r} \square \\ + 24 \\ \hline 52 \end{array}$$





$$\begin{array}{r} \square \\ + 38 \\ \hline 64 \end{array}$$





$$\begin{array}{r} \square \\ + 45 \\ \hline 87 \end{array}$$


1. Etkinlik: Aşağıdaki toplama işlemlerinde verilmeyen toplananı altına işlem yaparak bulunuz.





$$3 + \square = 7$$




$$6 + \square = 10$$






$$7 + \square = 12$$






$$\square + 5 = 18$$






$$\square + 7 = 16$$






$$\square + 15 = 28$$





$$\square + 5 = 18$$




$$\square + 7 = 16$$





$$\square + 15 = 28$$






$$\square + 5 = 18$$






$$\square + 7 = 16$$






$$\square + 15 = 28$$






$$26 + \square = 38$$






$$45 + \square = 62$$






$$36 + \square = 61$$






$$\square + 5 = 18$$






$$\square + 7 = 16$$






$$\square + 15 = 28$$






$$\square + 23 = 49$$






$$\square + 36 = 73$$






$$\square + 28 = 82$$




$$\square + 5 = 18$$




$$\square + 7 = 16$$




$$\square + 15 = 28$$
