

1. Sınıf Toplama İşlemi

$$\begin{array}{r} 3 \\ + 5 \\ \hline \end{array}$$



$$\begin{array}{r} 8 \\ + 5 \\ \hline \end{array}$$




$$\begin{array}{r} 9 \\ + 0 \\ \hline \end{array}$$



$$\begin{array}{r} 17 \\ + 3 \\ \hline \end{array}$$



$$\begin{array}{r} 11 \\ + 5 \\ \hline \end{array}$$



$$\begin{array}{r} 4 \\ + 2 \\ \hline \end{array}$$



$$\begin{array}{r} 6 \\ + 9 \\ \hline \end{array}$$




$$\begin{array}{r} 8 \\ + 8 \\ \hline \end{array}$$



$$\begin{array}{r} 14 \\ + 5 \\ \hline \end{array}$$



$$\begin{array}{r} 10 \\ + 8 \\ \hline \end{array}$$



$$\begin{array}{r} 5 \\ + 5 \\ \hline \end{array}$$



$$\begin{array}{r} 9 \\ + 5 \\ \hline \end{array}$$




$$\begin{array}{r} 0 \\ + 5 \\ \hline \end{array}$$



$$\begin{array}{r} 15 \\ + 3 \\ \hline \end{array}$$



$$\begin{array}{r} 16 \\ + 3 \\ \hline \end{array}$$



$$\begin{array}{r} 7 \\ + 2 \\ \hline \end{array}$$



$$\begin{array}{r} 4 \\ + 7 \\ \hline \end{array}$$



$$\begin{array}{r} 6 \\ + 6 \\ \hline \end{array}$$



$$\begin{array}{r} 12 \\ + 3 \\ \hline \end{array}$$



$$\begin{array}{r} 13 \\ + 4 \\ \hline \end{array}$$

