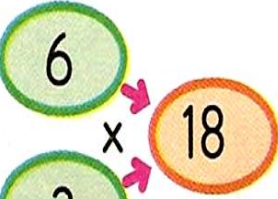

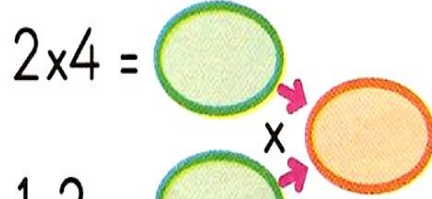


ÇARPMA İŞLEMİ

Aşağıdaki çarpma işlemlerini örnekteki gibi zihinden yapınız.

$3 \times 2 =$ 

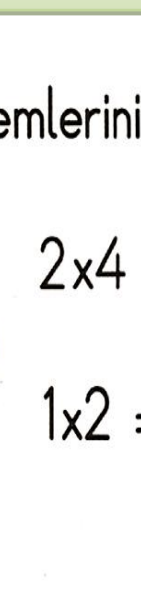
$3 \times 1 =$ 


$2 \times 4 =$ 


$1 \times 2 =$

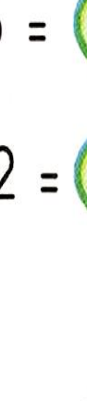
$4 \times 10 =$

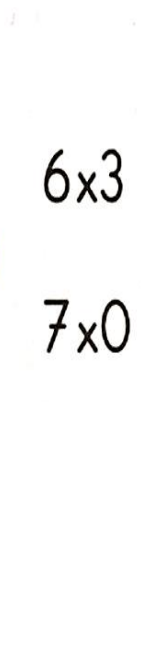
$8 \times 0 =$

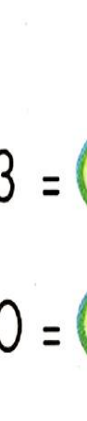
$5 \times 6 =$ 


$2 \times 0 =$ 


$1 \times 5 =$ 


$3 \times 2 =$ 


$2 \times 2 =$ 


$2 \times 5 =$ 


$3 \times 3 =$ 

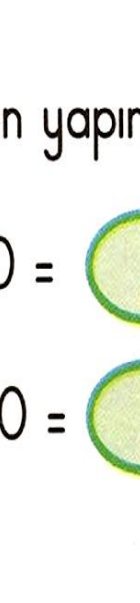
$1 \times 4 =$ 


$5 \times 10 =$ 


$3 \times 0 =$ 


$3 \times 3 =$ 

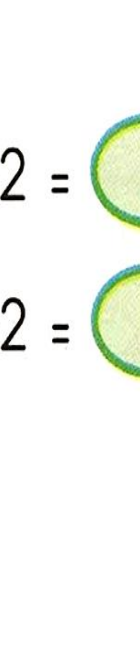
$3 \times 2 =$ 

$1 \times 5 =$ 

$2 \times 4 =$ 

$6 \times 3 =$ 

$7 \times 0 =$ 

$4 \times 2 =$ 

$2 \times 2 =$ 