



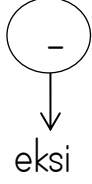


Çıkarma İşlemini Öğreniyorum

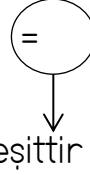
Aşağıdaki çıkarma işlemlerini yapalım. Noktalı yerlere uygun sayıları yazalım.



.....



.....





.....

..... eksi eşittir

.....'den çıktı kaldı

..... ile 'ün farkı 'dür.



.....

-

.....

=

.....

..... eksi eşittir

.....'dan çıktı kaldı

..... ile 'nin farkı 'tür.