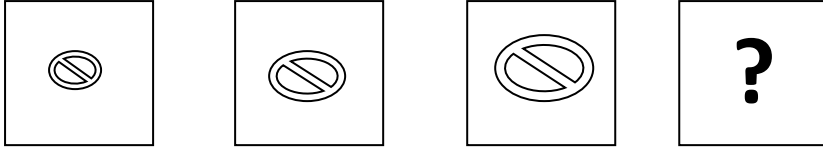


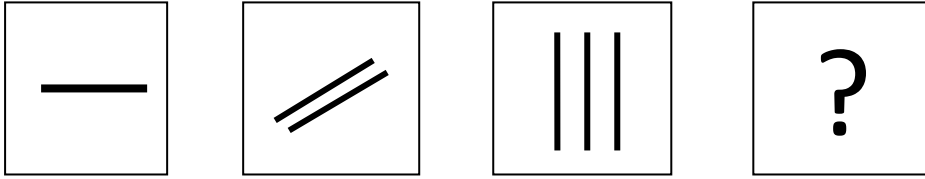
1.



Soru işareti yerine hangi seçenekteki şekil gelmelidir?

- A)
- B)
- C)
- D)

2.











Yukarıdaki şekilde soru işareti yerine hangi seçenekteki şekil gelmelidir?

- A)
- B)
- C)
- D)

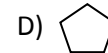
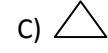
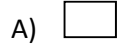
3. Aşağıdaki şekillerin hangisinde nokta dairenin içinde ama karenin dışındadır?

- A)
- B)
- C)
- D)

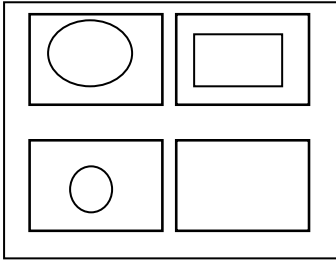
4.

		
		
		?

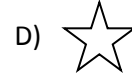
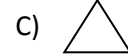
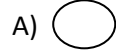
Yandaki şekilde soru işareti yerine hangi şekil gelmelidir?




5.



Yandaki şekilde boş karenin içine hangi şekil gelmelidir?



6.



iz

Yukarıdaki şekilde anlatılmak istenen kelime aşağıdakilerden hangisidir?


A) Fil

B) File

C) Filiz

D) Fil hortumu

7.



Yukarıdaki şekilde anlatılmak istenen kelime aşağıdakilerden hangisidir?

- A) Sıra
- B) Sarı
- C) Arı
- D) Darı

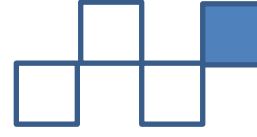
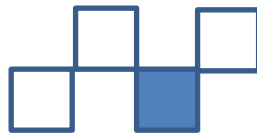
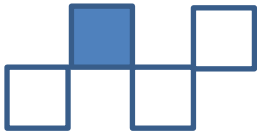



8.



Yukarıdaki şekilde anlatılmak istenen kelime aşağıdakilerden hangisidir?

- A) Deve
- B) Deveci
- C) Davet
- D) Devlet

9.




?

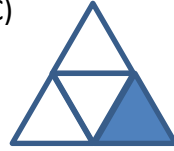
A)



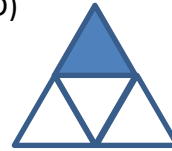
B)



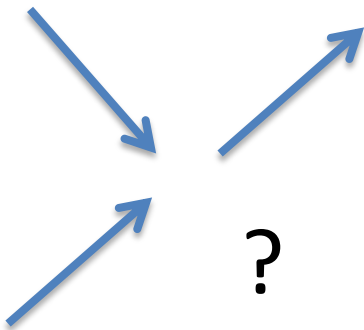
C)



D)



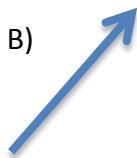
10.



A)



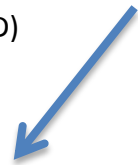
B)



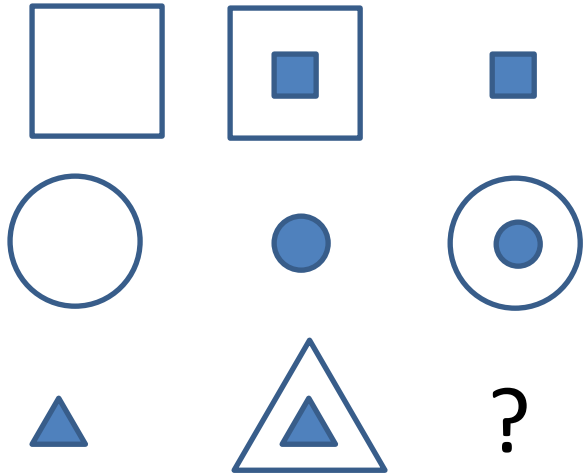
C)




D)



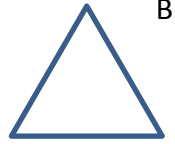
11.



A)



B)




C)




D)




12.




A)




B)



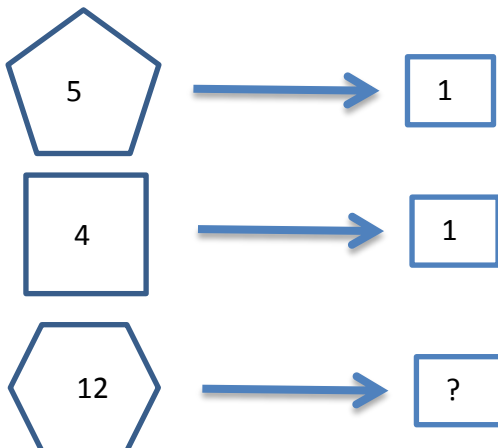
C)



D)



13.



? İşareti yerine aşağıdakilerden hangisi gelmelidir?

- A) 1
- B) 2
- C) 3
- D) 4

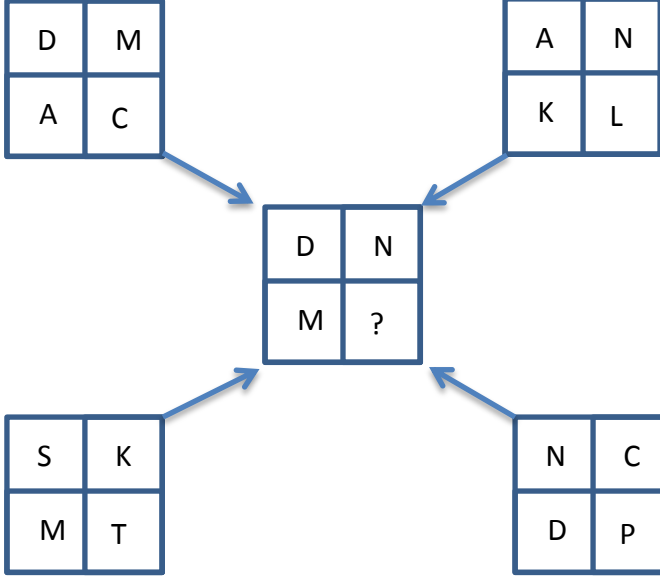
14.

ÇORUM → MANİSA → ADIYAMAN → ?

? İşareti yerine aşağıdakilerden hangisi gelmelidir?

- A) NEVŞEHİR
- B) ÇANKIRI
- C) DİYARBAKIR
- D) ANKARA

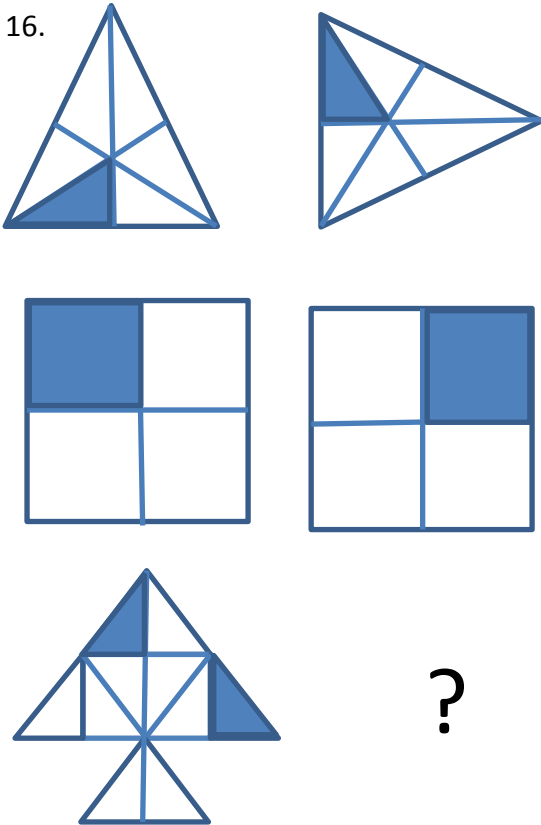
15.



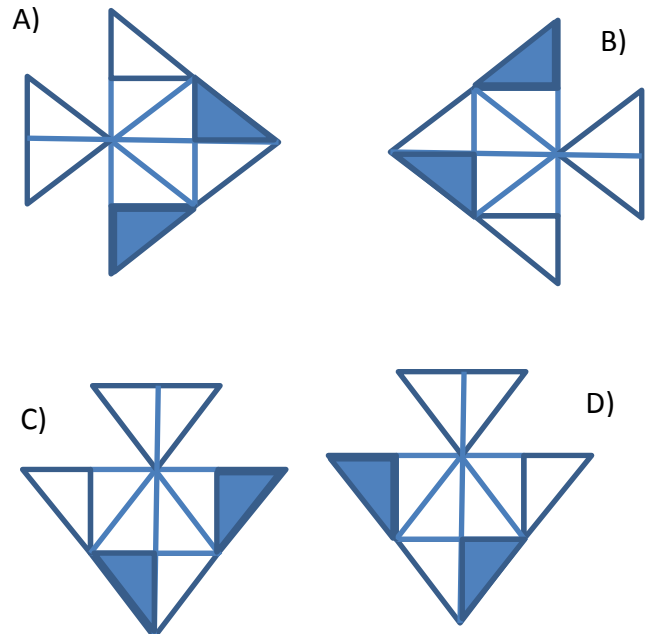
? İşareti yerine aşağıdakilerden hangisi gelmelidir?

- A) D
- B) N
- C) C
- D) P









16.







? İşareti yerine aşağıdakilerden hangisi gelmelidir?



17.

		
		
	?	

A)  B)  C)  D) 

18.

<table border="1" data-bbox="201 882 360 1039"> <tr><td>2</td><td>5</td></tr> <tr><td>3</td><td>7</td></tr> </table>	2	5	3	7	<table border="1" data-bbox="520 882 679 1039"> <tr><td>3</td><td>2</td></tr> <tr><td>7</td><td>5</td></tr> </table>	3	2	7	5	<table border="1" data-bbox="839 882 999 1039"> <tr><td>7</td><td>3</td></tr> <tr><td>5</td><td>2</td></tr> </table>	7	3	5	2	?
2	5														
3	7														
3	2														
7	5														
7	3														
5	2														

A)

7	5
2	3

 B)

7	3
2	5

 C)

3	7
5	2

 D)

5	7
2	3

19.

O → C

E → F

B → ?

? İşareti yerine aşağıdakilerden hangisi gelmelidir?







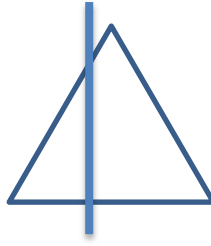

E) D

F) R

G) P

H) G

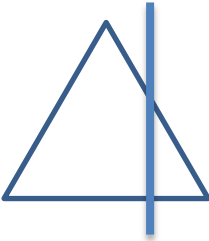
20.




?

Yukarıda ? işareti yerine aşağıdakilerden hangisi gelmelidir?

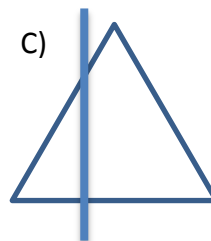
A)




B)





C)



D)




21.



?


A)




B)



C)



D)



22.



?

A)



B)



C)



D)

