





BÖLME İŞLEMİ YAPALIM


1. Etkinlik : Aşağıdaki bölme işlemlerini yapalım.


$$\begin{array}{r} 8 \\ | \\ \hline \end{array}$$



$$\begin{array}{r} 6 \\ | \\ \hline \end{array}$$



$$\begin{array}{r} 7 \\ | \\ \hline \end{array}$$



$$\begin{array}{r} 2 \\ | \\ \hline \end{array}$$



$$\begin{array}{r} 12 \\ | \\ \hline \end{array}$$



$$\begin{array}{r} 30 \\ | \\ \hline \end{array}$$



$$\begin{array}{r} 10 \\ | \\ \hline \end{array}$$



$$\begin{array}{r} 21 \\ | \\ \hline \end{array}$$



$$\begin{array}{r} 32 \\ | \\ \hline \end{array}$$



$$\begin{array}{r} 9 \\ | \\ \hline \end{array}$$



$$\begin{array}{r} 45 \\ | \\ \hline \end{array}$$



$$\begin{array}{r} 12 \\ | \\ \hline \end{array}$$


$$\begin{array}{r} 27 \\ | \\ \hline \end{array}$$


$$\begin{array}{r} 28 \\ | \\ \hline \end{array}$$


$$\begin{array}{r} 10 \\ | \\ \hline \end{array}$$


$$\begin{array}{r} 18 \\ | \\ \hline \end{array}$$


$$\begin{array}{r} 18 \\ | \\ \hline \end{array}$$


$$\begin{array}{r} 35 \\ | \\ \hline \end{array}$$
