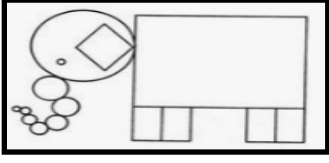
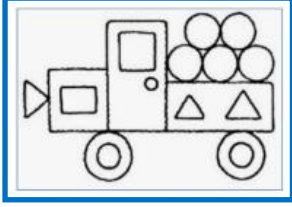





GEOMETRİK ŞEKİLLER KONU TESTİ



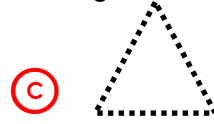
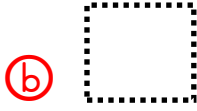
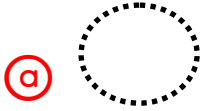
1. Yukarıdaki resimde aşağıdaki geometrik şekilden hangisi yoktur ?






2. Yukarıdaki resimde en çok hangi geometrik şekil bulunmaktadır ?





3. Yukarıdaki şekilde aşağıdaki geometrik şekillerden hangisi en az bulunmaktadır?




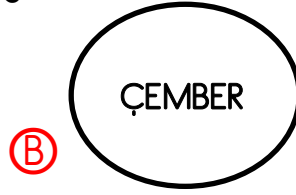
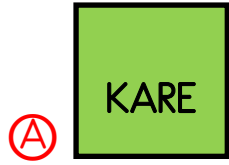
4. Aşağıdaki çocuklardan hangisi köşesi olmayan bir şekli elinde tutmaktadır?




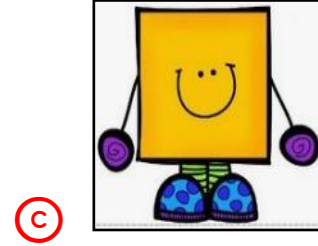
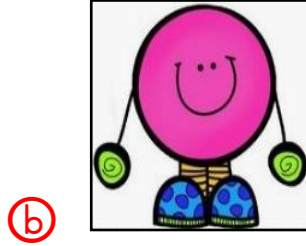
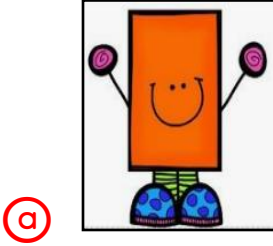
5. Yukarıdaki resim çerçevesi aşağıdaki geometrik şekillerden hangisine benzemektedir?



6. Öğretmeni Furkan'a tahtaya üç kenarı ve üç köşesi olan bir şekil çizmesini istemiştir. Furkan aşağıdakilerden hangisini çizmiş olabilir ?



7. Aşağıdakilerden hangisinin kenar sayısı diğerlerinden farklıdır ?



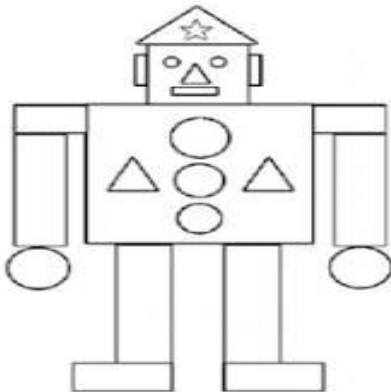
8. Yukarıdaki resimde üçgen ve çemberlerin toplamı kaçtır ?
- (a) 12 (b) 13 (c) 14



9. Yukarıdaki üç kibrit çöpünü kullanarak aşağıdaki geometrik şekillerden hangisini oluşturabiliriz?

- (a) Kare
(b) Dikdörtgen
(c) Üçgen

10. Aşağıdaki resimde üçgen, kare ve çemberlerin toplam sayısı kaçtır?



- (a) 10
(b) 11
(c) 12