



DOĞAL SAYILAR

☀ Aşağıdaki okunuşları verilen sayıları yazalım.

Yedi yüz elli iki 

İki yüz yetmiş 

Dokuz yüz kırk 

Sekiz yüz dört

Yüz altmış üç

Üç yüz doksan bir

Dokuz yüz doksan dokuz

Altı yüz almış altı

Altı yüz yedi

İki yüz elli sekiz

Yüz doksan sekiz

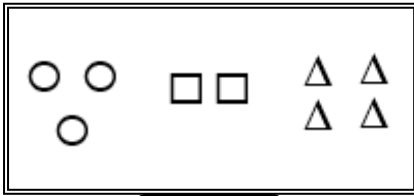
Sekiz yüz doksan

☀ Aşağıdaki şekillerin neyi ifade ettiği verilmiştir. Vuna göre şekillerin ifade ettiği sayıları yazalım.

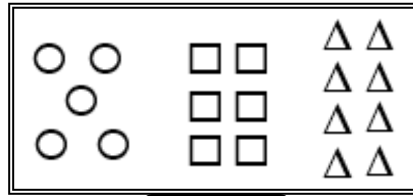
○ → Yüzlük

□ → Onluk

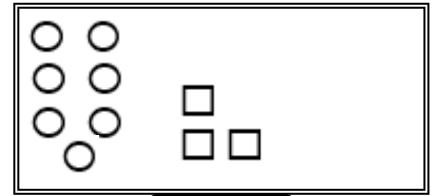
△ → Birlik



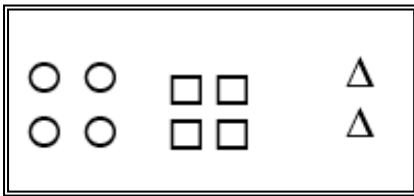
.....



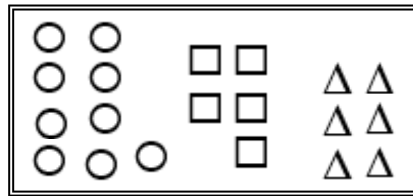
.....



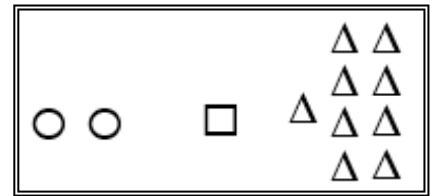
.....



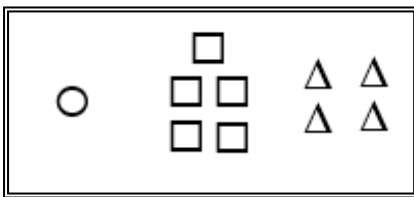
.....



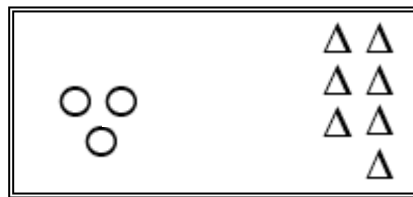
.....



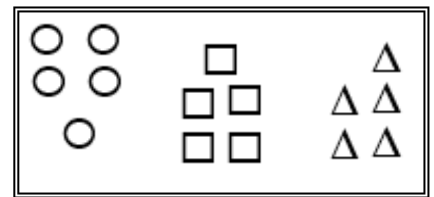
.....



.....



.....



.....