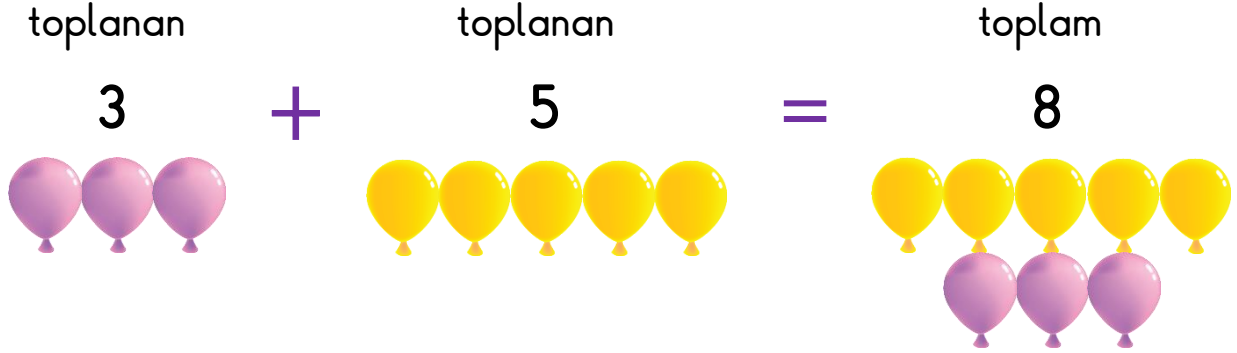


❖ Toplama İşlemini Tanıyalım

Toplama işlemi yapılırken "+" artı, "=" eşittir işaretleri kullanılır.

+ → artı

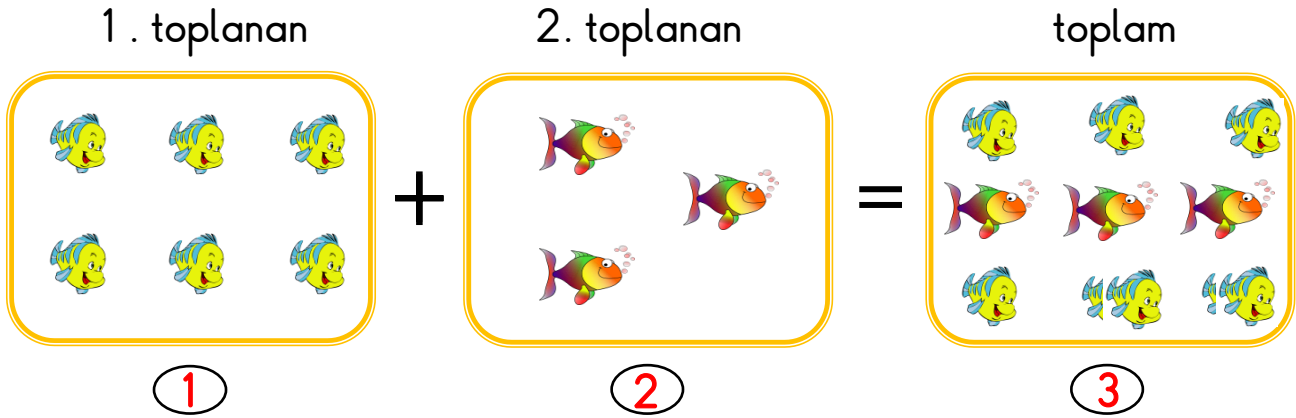
= → eşittir



- ✓ 3 balon, 5 balon daha 8 balon eder.
- ✓ 3 balon artı 5 balon, eşittir 8 balon eder.
- ✓ 3 balon ile 5 balonu toplarsak 8 balon eder.

toplanan → 3
toplanan → + 5
toplam → 8

1. Aşağıdaki görselleri inceleyelim. Bu görsellere göre soruları cevaplayalım.



- ✓ 1. görselde kaç tane balık vardır?
- ✓ 2. görselde kaç tane balık eklenmiştir?
- ✓ 3. görselde balıkların sayısı artmış mı azalmış mı?
- ✓ 3. görselde toplam kaç balık olmuştur?

2. Aşağıdaki görselleri inceleyelim. Görsellerden yararlanarak toplama işlemlerini yapalım.






.....

+

.....

=

.....





.....

+

.....

=

.....





.....

+



.....

=


.....



3 + 2 = 5



..... + =



..... + =



..... + =