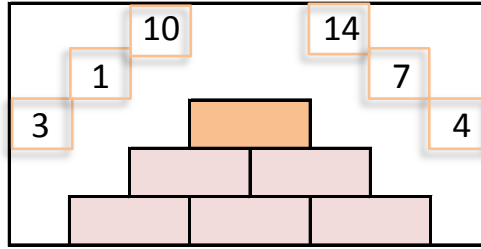
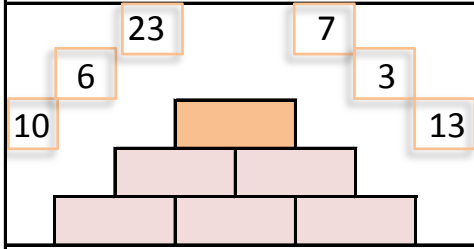
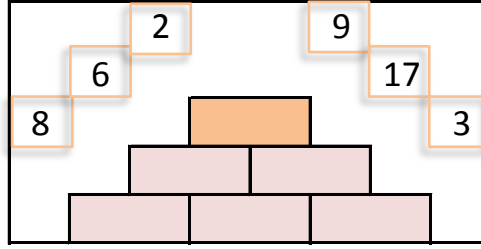
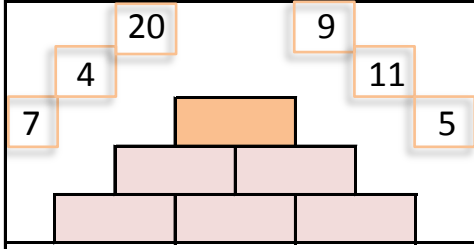


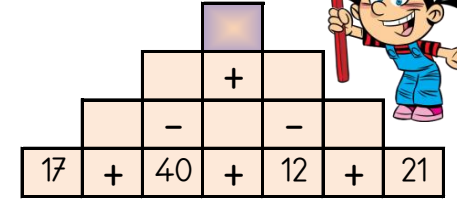
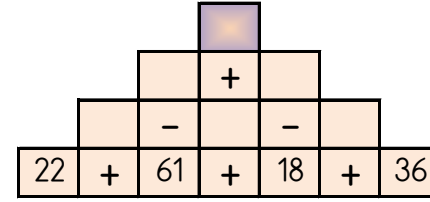
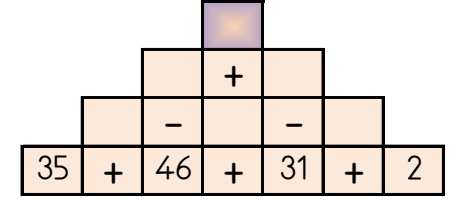
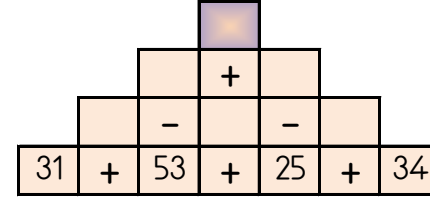
SAYILARI YERLEŞTİR (TOPLAMA PİRAMİDİ)

Toplama piramidi üzerindeki sayılar yerlerinden çıkmış. Sayıları yerlerine yazabilir misiniz?



PİRAMİT TOPLAMA ÇIKARMA

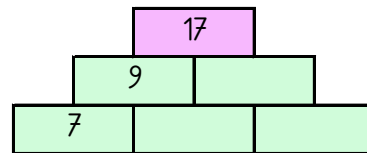
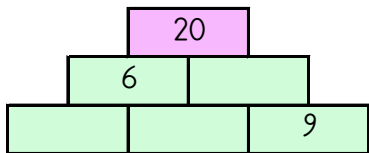
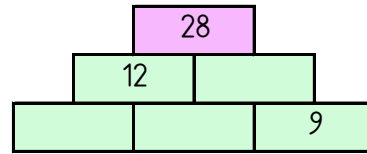
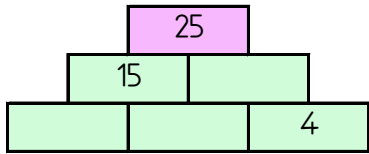
Sayılar arasındaki işlemleri yaparak piramitin tepesindeki sayıya ulaşın.



29 48 35 24 25

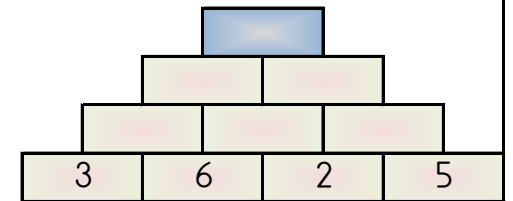
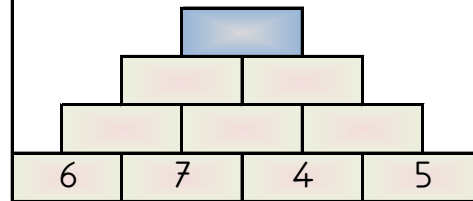
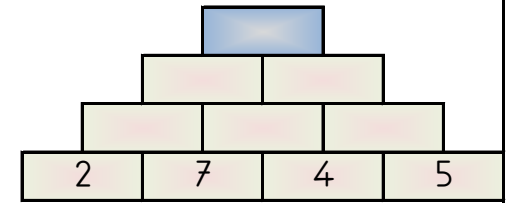
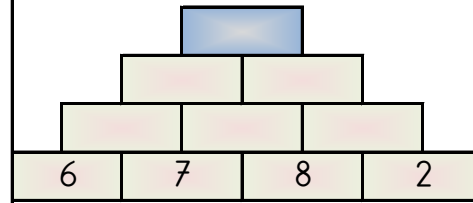
TOPLAMA PİRAMİDİNDE VERİLMİYEN SAYILAR

Toplama piramidi üzerinde bazı sayılar verilmemiştir. Bunları bulabilir misin?



PİRAMİT TOPLAMA

Piramitin altındaki sayıları toplayarak tepedeki sayıya ulaşın ve bu sayıyı işaretleyin.



44 53 40 45 32