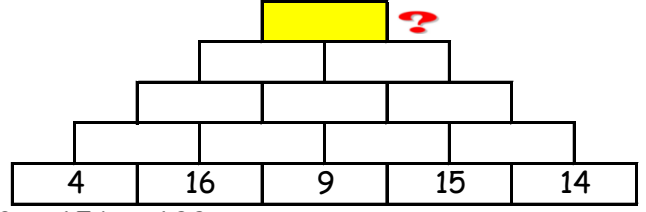
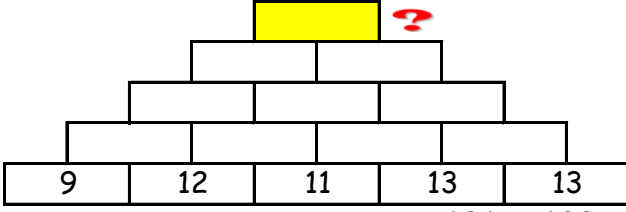
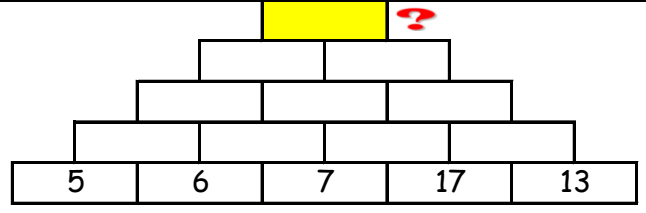
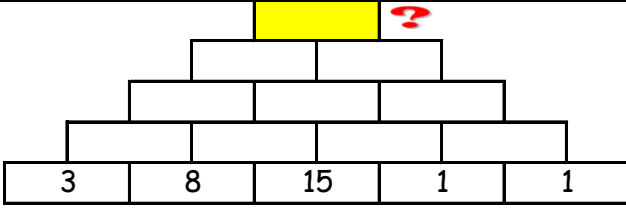


## PİRAMİT TOPLAMA

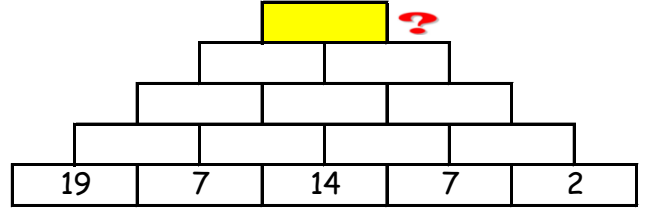
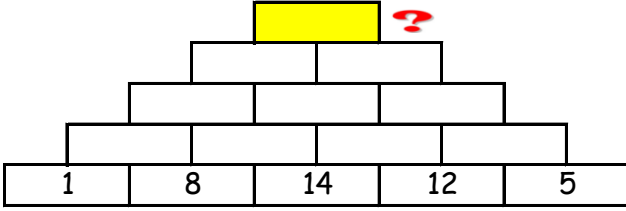
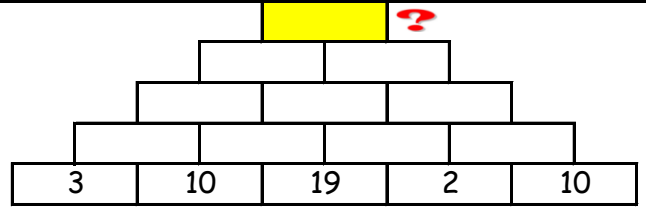
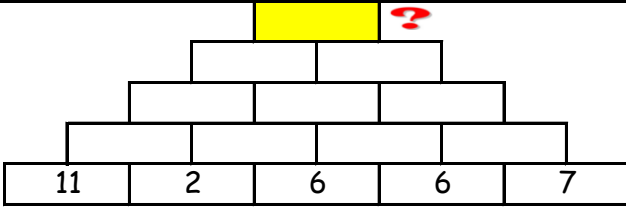
Toplama piramitlerinde aşağıdaki iki kutunun toplamını bir üst kutuya yazarak ilerle. En tepedeki sayıyı bul ve işaretle.



196 - 130 - 152 - 156 - 188

## PİRAMİT TOPLAMA

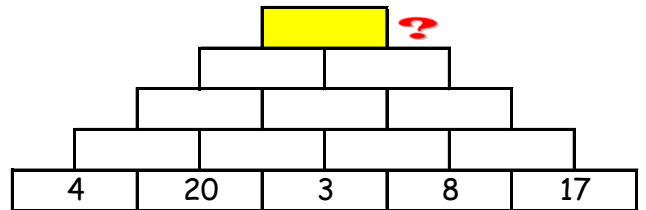
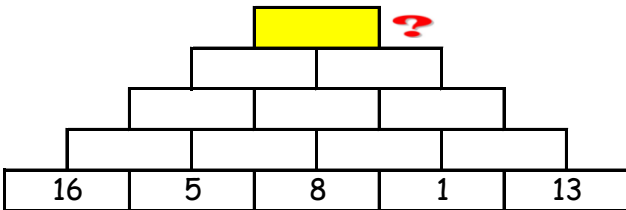
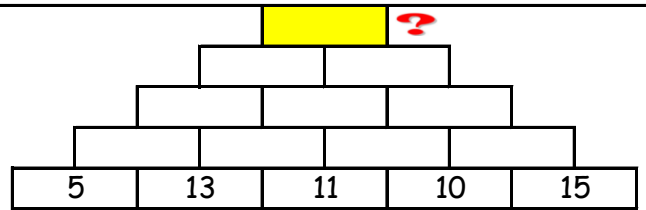
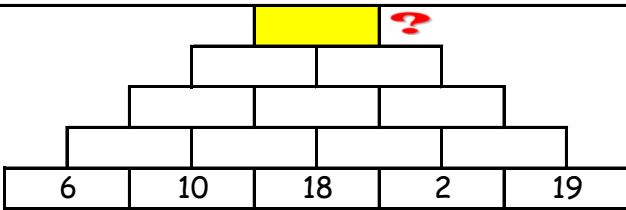
Toplama piramitlerinde aşağıdaki iki kutunun toplamını bir üst kutuya yazarak ilerle. En tepedeki sayıyı bul ve işaretle.



86 - 170 - 175 - 90 - 161

## PİRAMİT TOPLAMA

Toplama piramitlerinde aşağıdaki iki kutunun toplamını bir üst kutuya yazarak ilerle. En tepedeki sayıyı bul ve işaretle.



101 - 178 - 151 - 181 - 159