



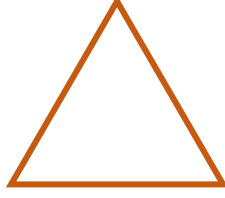


GEOMETRİK ŞEKİLLER

- Aşağıdaki geometrik şekillerin adını yazınız.



- Aşağıdaki geometrik şekilleri isimleri ile eşleştiriniz.



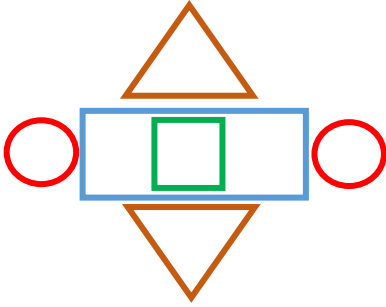
Kare

Daire

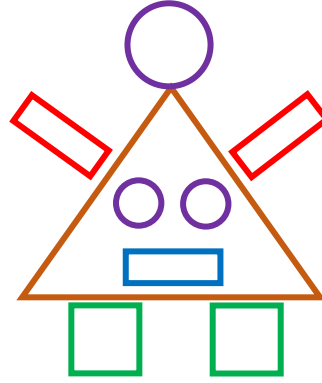
Dikdörtgen

Üçgen

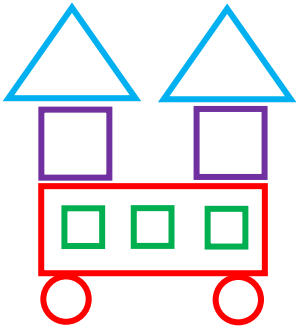
- Aşağıdaki şekilleri örnekteki gibi sayarak yazalım.



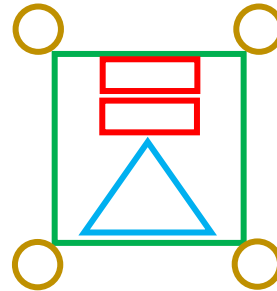
2 üçgen
1 kare
2 daire
1 dikdörtgen



.....
.....
.....
.....



.....
.....
.....
.....



.....
.....
.....
.....