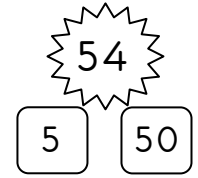


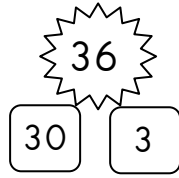

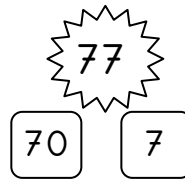
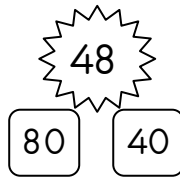


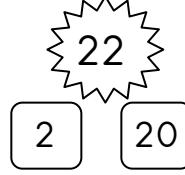
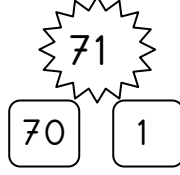

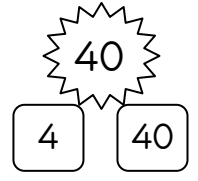

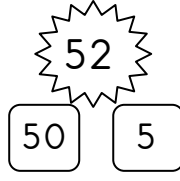



# MATEMATİK

1.Etkinlik: Verilen doğal sayıların onlar basamağındaki rakamın basamak değerinin yazılı olduğu kutuyu boyyalım.



2.Etkinlik: Verilen doğal sayıların birler basamağındaki rakamın basamak değerinin yazılı olduğu kutuyu boyyalım.

