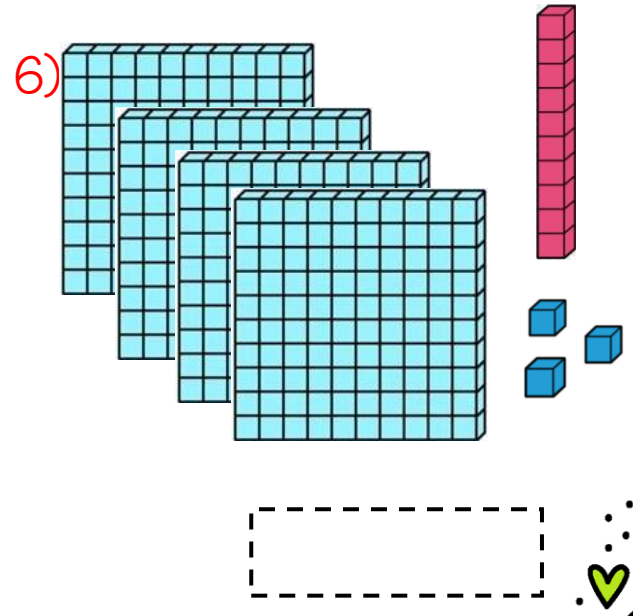
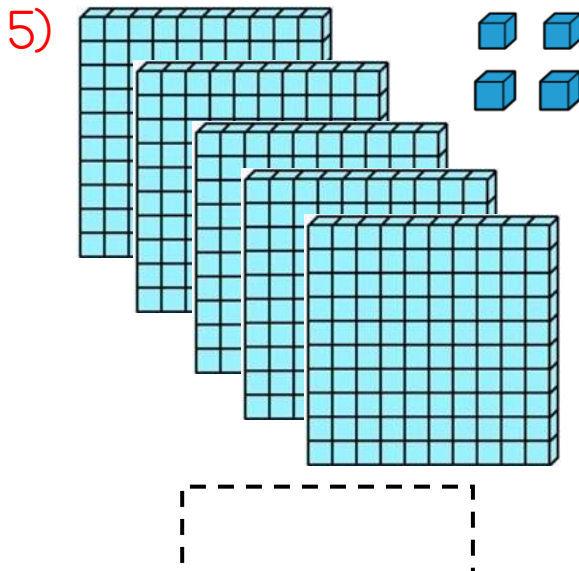
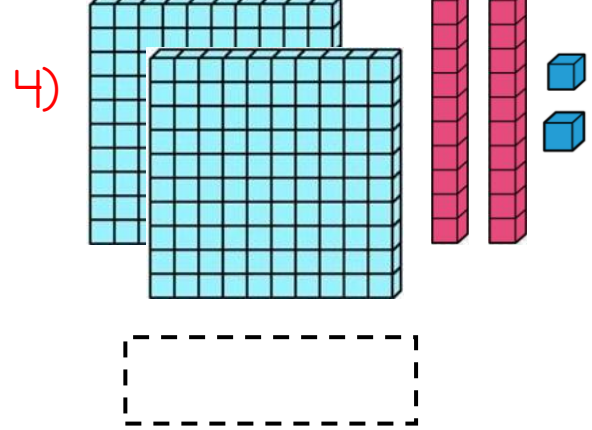
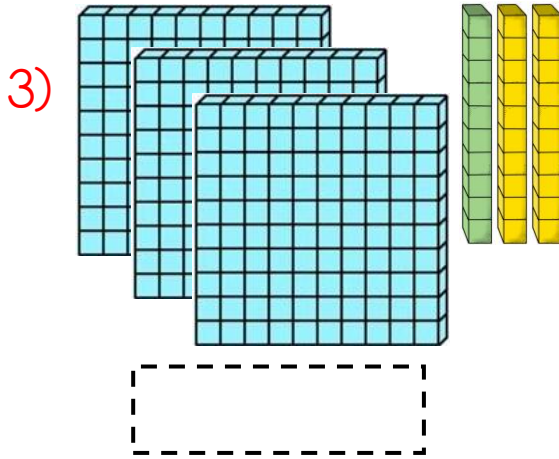
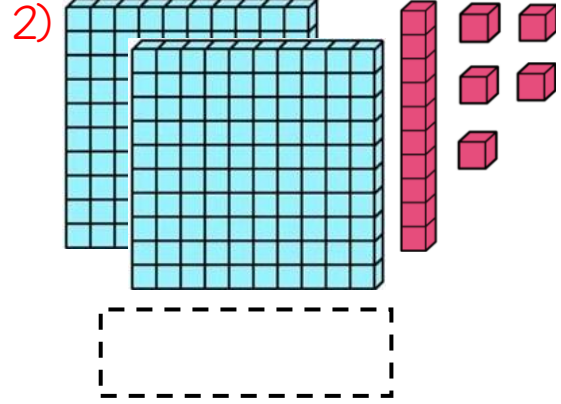
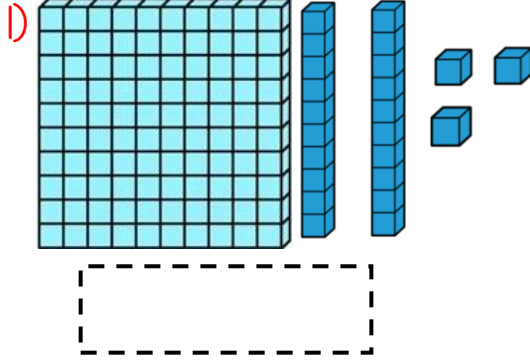















DOĞAL SAYILARI OKUYALIM VE YAZALIM

Aşağıda verilen taban bloklarının belirttiği sayıları yazalım.






Aşağıdaki doğal sayıların okunuşlarını
karşılarına yazınız.



Aşağıda okunuşları verilen doğal sayıları karşlarına yazınız.



.....



.....



.....



.....



.....



.....



.....



.....



.....



.....



Aşağıdaki tabloda verilen rakamları kullanarak üç basamaklı doğal sayılar oluşturunuz. Oluşturduğunuz doğal sayıların okunuşlarını da yazınız.

ÖRNEK

6, 3, 2

326

..... Üç... yüz... yirmi... altı.....

263

..... İki... yüz... atmış... üç.....

623

..... Altı... yüz... yirmi... üç.....

1)

5, 8, 4

.....

.....

.....

2)

9, 1, 7

.....

.....

.....

3)

6, 0, 4

.....

.....

.....

Hatırlatma: Üç basamaklı sayı oluştururken "0"ı başta kullanamayız. Baştaki "0" okunmaz ve sayımız iki basamaklı bir sayı olur.