


PAY, PAYDA, KESİR ÇİZGİSİ



$$\frac{1}{2}$$

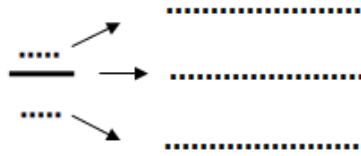
Pay
Kesir Çizgisi
Payda



$$\frac{2}{4}$$

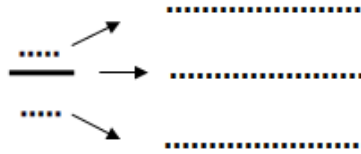
Kaç eş parça alındığı
Kesir Çizgisi
Bütünün kaç eş parçaya ayrıldığı

1) Şekillerin boyalı kısımlarına karşılık gelen kesirleri ve okunuşlarını yazalım.



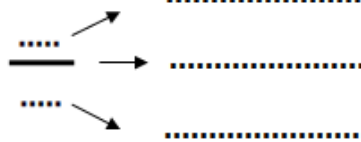

Okunuşu:

.....



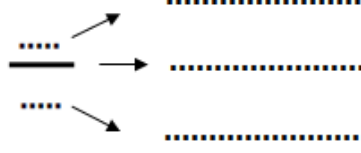
Okunuşu:

.....



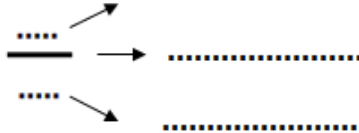
Okunuşu:

.....



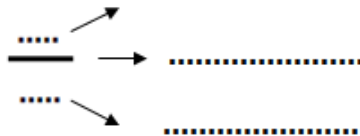

Okunuşu:

.....



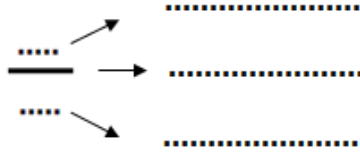
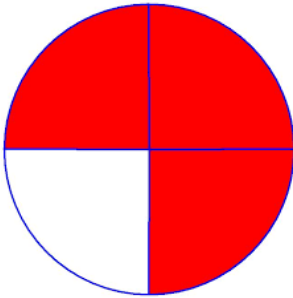
Okunuşu:

.....



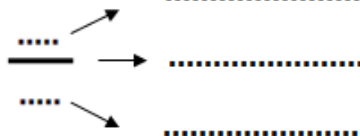
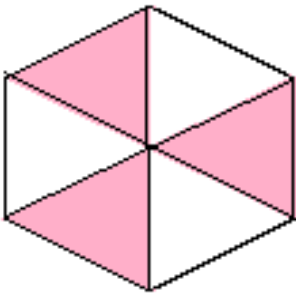
Okunuşu:

.....



Okunuşu:

.....



Okunuşu:

.....