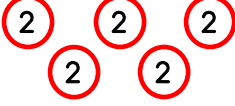




ÇARPMA İŞLEMİ




Aşağıdaki cümlelerdeki ve işlemlerdeki noktalı yerleri örnekteki gibi doldurunuz.



5 tane 2 , 10 eder.

6 kere 2 , 12 eder.

$$5 \times 2 = 10$$



.... tane , eder.

.... kere , eder.


$$.... \times =$$



.... tane , eder.

.... kere , eder.

$$.... \times =$$



.... tane , eder.

.... kere , eder.


$$.... \times =$$



.... tane , eder.

.... kere , eder.


$$.... \times =$$



.... tane , eder.

.... kere , eder.


$$.... \times =$$



.... tane , eder.

.... kere , eder.

$$.... \times =$$



.... tane , eder.

.... kere , eder.

$$.... \times =$$



.... tane , eder.

.... kere , eder.


$$.... \times =$$



.... tane , eder.

.... kere , eder.

$$.... \times =$$



.... tane , eder.

.... kere , eder.

$$.... \times =$$



.... tane , eder.

.... kere , eder.

$$.... \times =$$