

$$\begin{aligned}
 & \text{🌿} + \text{🌿} + \text{🌿} = 6 \\
 & \text{🌻} + \text{🌻} + \text{🌿} = 22 \\
 & \text{🌾} + \text{🌻} + \text{🌻} = 25 \\
 & \text{🌾} \times \text{🌻} + \text{🌿} = ?
 \end{aligned}$$

İŞLEM ALANI

$$\begin{aligned}
 & \text{☁️⚡} + \text{☁️⚡} + \text{☁️⚡} = 12 \\
 & \text{☁️☀️} + \text{☁️☀️} \times \text{☁️⚡} = 50 \\
 & \text{🌈} \times \text{🌈} + \text{☁️☀️} = 35 \\
 & \text{☁️☀️} + \text{🌈} \times \text{☁️⚡} = ?
 \end{aligned}$$


İŞLEM ALANI

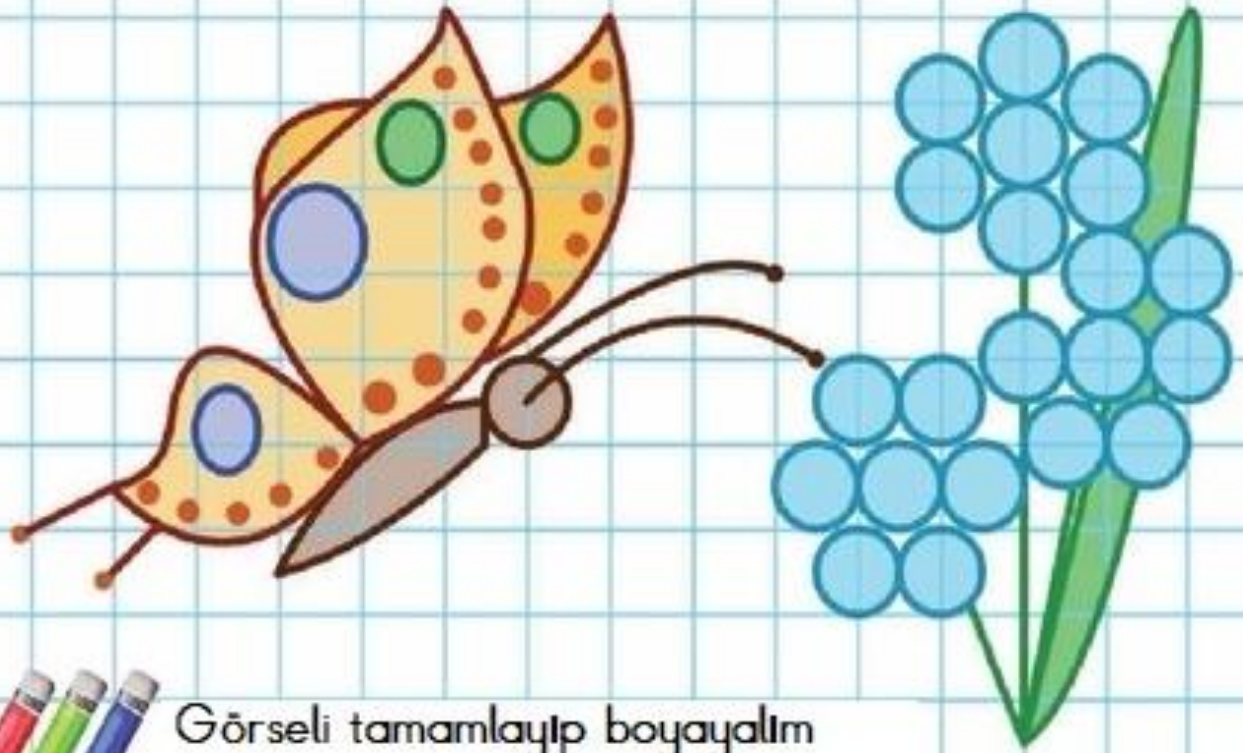
$$\begin{aligned}
 & \text{🍐} + \text{🍐} + \text{🍐} = 21 \\
 & \text{🍋} \times \text{🍐} + \text{🍋} = 40 \\
 & \text{🍋} \times \text{🍓} + \text{🍓} = 60 \\
 & \text{🍓} + \text{🍋} \times \text{🍐} = ?
 \end{aligned}$$

İŞLEM ALANI

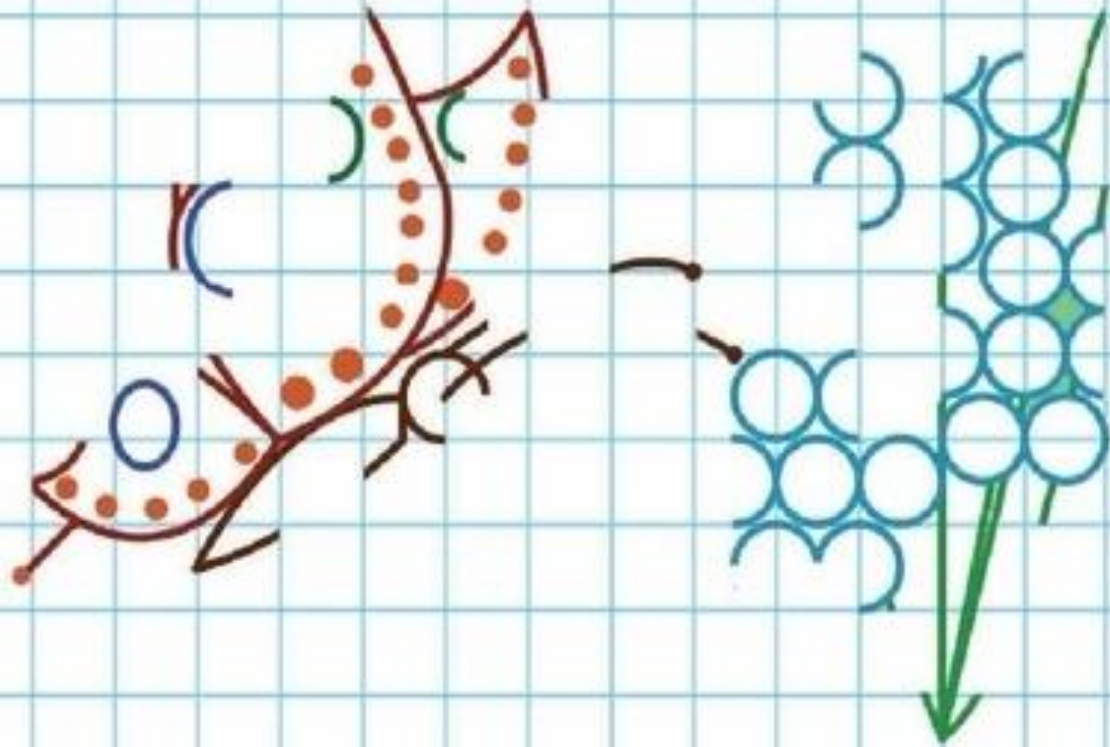
$$\begin{aligned}
 & \text{🚗} + \text{🚗} + \text{🚗} = 12 \\
 & \text{🚚} + \text{🚚} + \text{🚗} = 28 \\
 & \text{🚚} + \text{🚢} + \text{🚢} = 32 \\
 & \text{🚚} + \text{🚢} \times \text{🚗} = ?
 \end{aligned}$$


İŞLEM ALANI





Görseli tamamlayıp boyayalım





Görseli tamamlayıp boyayalım

